

Name: _____

DAY
91

1 What are three things you notice about the sentence below?

Who threw popcorn and oatmeal into Tom's stewpot?

Answers will vary, but may include ideas such as: starts with a capital, ends with a question, compound words, possessive noun, etc.



2 Circle the correct spelling for each picture.



choo **chew** chue **blew** blue bloo

chew



blew

3

askew

crooked; not straight

(adjective)

She hung the frame **askew**.

How does the frame look?

crooked or not straight



4

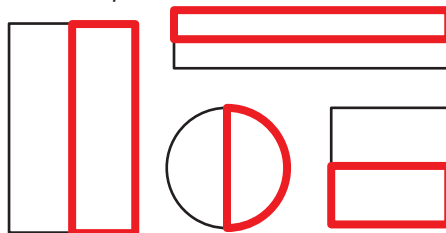
once

o n c e

o n c e

o n c e

5 Draw the missing half of each shape.



Halves are two equal parts of a whole.

6

$$6 \text{ tens} + 4 \text{ tens} = \underline{10} \text{ tens}$$

$$60 + 40 = \underline{100}$$

$$7 \text{ tens} + 4 \text{ tens} = \underline{11} \text{ tens}$$

$$\underline{70} + 40 = \underline{110}$$

7 Use the data table to answer the questions.

Number of Kids Who Brushed Their Teeth Today

Logan's Class	10
Amy's Class	8
Tresten's Class	6
Estela's Class	11

The most kids brushed their teeth in **Estela**'s class.

The fewest kids brushed their teeth in **Tresten**'s class.

8 On Friday, Sonia picked some strawberries. On Saturday, she picked 30 more strawberries. Over both days, she picked 42 strawberries in all.

How many of the strawberries did she pick on Friday?

12 strawberries were picked on Friday
12 + 30 = 42



Name: _____

DAY
92

1 Circle the 3 compound words in each sentence.

Who threw **popcorn** and **oatmeal** into Tom's **stewpot**?
The wind blew my new **sunglasses** onto the **highway**.

Combining 2 or more small words makes a compound word.

2 Sort the words by their spelling pattern.

glue

flew

grew

true

-ew

flew
grew

-ue

glue
true

3

askew

crooked; not
straight
(adjective)



What does **askew** have
to do with couch cushions?

ANSWERS WILL VARY

**[couch cushions might be
askew]**

4 Use context clues to find the
meaning of the underlined word.

**She's allergic to nuts
like almonds and
cashews.**

Cashews are _____.

shoes

nuts

5 Write combinations of 11.

11	
5	6

$11 - \underline{6} = 5$

$\underline{11} - 5 = 6$

$6 + \underline{5} = 11$

11	
9	2

$2 + \underline{9} = 11$

$11 - 9 = \underline{2}$

$\underline{11} - 2 = 9$

6 Circle true statements.
Cross out false statements.


26 can be expressed as:

~~3 tens 6 ones~~

2 tens 6 ones

1 ten 16 ones

7 Fill in the missing 5 minutes.



Draw the minute hand showing
that 40 minutes have passed
since the hour started.

8 In his garden, Mr. Darvish grew 24 sunflowers in his garden. He picked some of them.
He still has 10 sunflowers in his garden.

How many sunflowers did Mr. Darvish pick?

14 sunflowers
24 - 14 = 10



Name: _____

DAY
93



1 Finish the sentence with a compound word made with the word rain.

In the storm, we saw _____
ANSWERS WILL VARY
Don't forget the _____

EXAMPLES:
rainbow, raindrops,
rainclouds, rainboots,
raincoats, rainfall, rainspout,
rainstorm, rainwater

2 Write the word that matches each picture.

screw drew grew few



drew

screw

3

askew

crooked; not
straight
(adjective)



Your clothes might be
askew if...

ANSWERS WILL VARY

**[if you dress in a hurry, if
it's windy, if you run, if
they're too big, etc.]**

4

some

s o m e

s o m e

s o m e

5 Add.

1 + **9** = 10 9 + **1** = 10

2 + **8** = 10 8 + **2** = 10

3 + **7** = 10 7 + **3** = 10

What do you notice?


ANSWERS WILL VARY
[you can change the order of addends and
the sum stays the same]

6 Write the numeral.

6 ones
2 tens **26**

3 tens
11 ones **41**

7 Cross out the shape that is
NOT a triangle.



8

Golda is 46 years old. She is 5 years older than Lewis.

How old is Lewis?

41 years old
46 - 5 = 41



How can you tell the shape is not
a triangle?

**It has 4 sides and
angles, but a
triangle has only 3.**

Name: _____

DAY
94

1 Rewrite the sentence correctly.

who droo the star fish at the seashore

**Who drew the starfish at
the seashore?**

2 Circle & write the word that has the same vowel sound as the picture.



spun
good
new

new



tune
jump
book

tune

3

askew

crooked; not
straight
(adjective)



Would it be good or bad to have
a bridge that is **askew**? Why?

ANSWERS WILL VARY

4

(un-)

"not" or "to remove"

unscrew

prefix

base word

un

screw

definition

to remove the screw

5 Subtract.

5 - 4 = **1**

15 - 4 = **11**

35 - 4 = **31**

65 - 4 = **61**

6 Write **greater** or **less** to
compare the numbers.

15 is **less** than 25

71 is **greater** than 41

67 is **less** than 76

80 is **greater** than 26

7 Rogan has 12 carrots to make
3 pots of stew.
**How many carrots will go in
each pot of stew?**

4 carrots

12 is

3 groups of 4



8 Skip count each row by 10.

2 12 22 **32** **42** **52** 62 **72** 82 **92** 102

7 **17** **27** 37 **47** **57** **67** 77 87 **97** **107**

Name: _____













DAY
95

1 Use the word **book** to form a compound word and use it in a sentence. Circle the compound words.

ANSWERS WILL VARY







EXAMPLES: bookmark, bookend, notebook, bookshelf, bookstore, textbook, workbook, playbook, bookworm, bookcase, guidebook, cookbook, etc.

2 Draw lines to match each singular noun with its plural form.

woman	mouse	goose	deer
			
			
geese	women	deer	mice
			

Change the spelling of some nouns to make them plural.

3 Draw a line to connect each word to the correct meaning.

		
		
to be happy when someone feels bad	calm and relaxed; not loud, harsh, or irritating	to move slowly back and forth

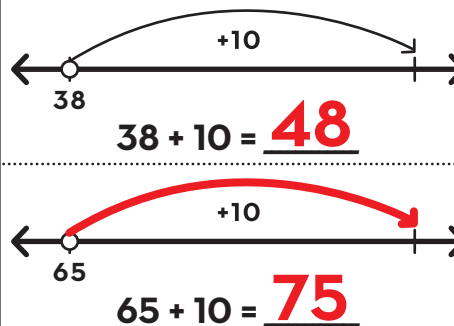
4 **piece**

p	i	e	c	e
p	i	e	c	e
p	i	e	c	e

5 Solve.

$$\begin{aligned} 25 - 1 &= 24 \\ 4 + 4 &= 8 \\ 30 + 30 &= 60 \\ 48 - 8 &= 40 \end{aligned}$$

6 Draw arrows to add ten on the open number line.



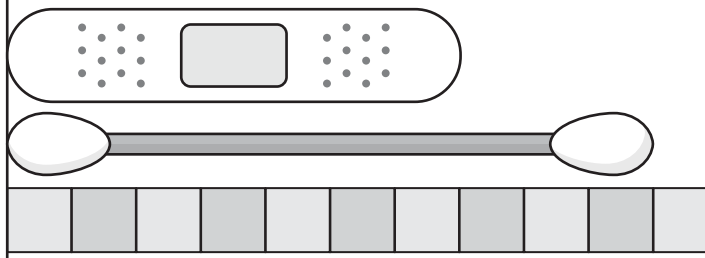
7 Andrew blew 28 bubbles. Camila blew 20 bubbles. **How many bubbles did they blow in all?**

48 bubbles
28 + 20 = 48

8 Each \square stands for 1 unit.

The Band-Aid is about **7** units long.

The swab is **3** units longer than the Band-Aid.



Name: _____

DAY
96

1 What are three things you notice about the sentence below?

Anytime I see a lighthouse, I feel seasick!



Answers will vary, but may include ideas such as: it starts with a capital, it's an exclamation, it has compound words, etc.

2 Circle the correct spelling for each picture.



knight

nite

night



flite

flight

flyte

night

flight

3

slight

very small

(adjective)

An untied shoelace is just a **slight** problem.

Is an untied shoelace a big problem?

No, it's a very small problem.



4

right

r i g h t

r i g h t

r i g h t

5

The number line goes from 0 to 1. Draw an X halfway between 0 and 1.



How did you know where to draw the X?

it's in the middle between 0 and 1.

6

$$10 \text{ tens} - 3 \text{ tens} = \underline{7} \text{ tens}$$

$$\underline{100} - 30 = \underline{70}$$

$$9 \text{ tens} - 8 \text{ tens} = \underline{1} \text{ ten}$$

$$90 - \underline{80} = \underline{10}$$

7

Use the data table to answer the questions.

Number of Kids Who Brushed Their Teeth Today

Logan's Class	10
Amy's Class	8
Tresten's Class	6
Estela's Class	11

2 fewer kids brushed in Tresten's class than in **Amy's** class.

There are 19 kids in Logan's class. **10** kids brushed and **9** did not brush today.

8

Callie had \$30. She got some more money for her birthday. Now she has \$45.

How much money did Callie get for her birthday?

15 dollars

$$\underline{\$30} + \underline{\$15} = \underline{\$45}$$



Name: _____

DAY
97

1 Circle the 3 compound words in each sentence.

Anytime I see a lighthouse, I feel seasick.
Can you get a sunburn from the moonlight outside?

Combining 2 or more small words makes a compound word.

2 Sort the words by their spelling pattern.

write

sight

quite

right

-ight

sight
right

-ite

write
quite

3

slight

very small
(adjective)



If there is only a **slight** chance of winning a game, are you likely to win?

ANSWERS WILL VARY

[probably not--there's only a very small chance of winning]

4 Write a synonym from the box for each bold word.

leap pick make

choose pick

jump leap

build make

Synonyms are words that have about the same meaning.

5 Use 2 numbers in each group to make 11.

3 8 9

$$11 = 3 + 8$$

7 4 6

$$11 = 7 + 4$$

6 Circle true statements. Cross out false statements.


84 can be expressed as:

7 tens 14 ones

~~7 tens 4 ones~~

4 ones 8 tens

7 Fill in the missing 5 minutes.



Draw the minute hand showing that 10 minutes have passed since the hour started.

8 There are 38 light bulbs in the house. Some light bulbs went out. 28 light bulbs are still glowing.
How many light bulbs went out?

10 light bulbs
38 - 10 = 28



Name: _____

DAY
98

1 Finish the sentence with a compound word made with the word *light*.

The _____ is bright!
ANSWERS WILL VARY
Can you see the _____

EXAMPLES:
headlight, stoplight, sunlight,
daylight, moonlight, starlight,
streetlight, lighthouse,
lamplight, skylight, taillight


2 Write the word that matches each picture.

might

knight

bright

flight



bright

knight

3

slight

very small
(adjective)



You might give a **slight** smile if...

ANSWERS WILL VARY

**[something is a little
funny, you're a little
happy, etc.]**

4

high

h i g h

h i g h

h i g h

5 Fill in combinations of 10.

10	$10 = 3 + 7$
3 7	$10 = 7 + 3$

10	$10 = 1 + 9$
1 9	$10 = 9 + 1$

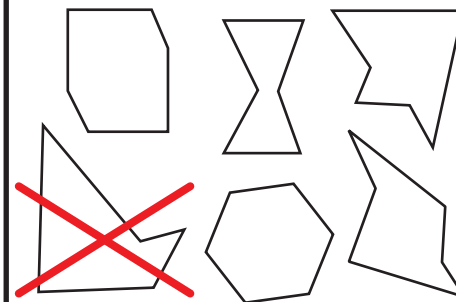
10	$10 = 6 + 4$
6 4	$10 = 4 + 6$

6 Write the numeral.

5 tens
20 ones **70**

7 ones
4 tens **47**

7 Cross out the shape that is NOT a hexagon.



8 Hank has flown on 57 airplane flights. That is 4 more airplane flights than Juniper.
On how many airplane flights has Juniper flown?

53 airplane flights
 $57 - 4 = 53$



How can you tell the shape is not a hexagon?

**It has 5 sides and
angles, but a
hexagon has 6.**

Name: _____

DAY
99

1 Rewrite the sentence correctly.

is the streetlite too dim to play foot ball

**Is the streetlight too dim
to play football?**

2 Circle & write the word that has the same vowel sound as the picture.



tight
give
limp

tight



print
friend
slime

slime

3

slight

very small
(adjective)



Would you go on a picnic if there was a **slight** chance of rain?

ANSWERS WILL VARY

4

(-full)

"full of"

frightful

base word

fright

suffix

ful

definition

full of fright

5 Add.

$2 + 6 = \underline{8}$

$12 + 6 = \underline{18}$

$52 + 6 = \underline{58}$

$92 + 6 = \underline{98}$

6 Write **greater** or **less** to compare the numbers.

88 is **greater** than 87

23 is **less** than 32

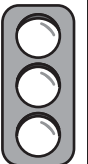
59 is **less** than 95

14 is **less** than 41

7 There are 10 stoplights. Each stoplight has 3 colored lights. How many lights are there in all?

30 lights

**3 groups of
10 makes 30**



8 Start skip counting by 10. Switch to a different rule at the arrows.

count by 10

10

20

30

40

50

count by 5

55

60

65

count by 1

66

67

68

Name: _____

DAY
100

1 Use the word **time** to form a compound word and use it in a sentence. Circle the compound words.

ANSWERS WILL VARY

EXAMPLES: bedtime, anytime, sometime, daytime, teatime, timeout, lifetime, timeline, longtime, playtime, lunchtime, nighttime, dreamtime, showtime, etc.

2 Write the two words that make up each compound word.

goodnight = good + night

spotlight = spot + light

righthanded = right + handed

Combining 2 or more small words makes a compound word.

3 Draw a line to connect each word to the correct meaning.

~~askew~~

~~mellow~~

~~spunky~~

~~calm and relaxed; not loud, harsh, or irritating~~

~~lively, brave, full of spirit and energy~~

~~crooked; not straight~~

4 **begin**

b e g i n

b e g i n

b e g i n

5 Solve.

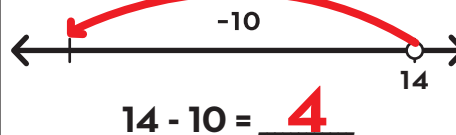
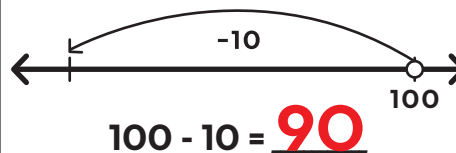
$$8 + 8 = 16$$

$$50 - 40 = 10$$


$$3 + 20 = 23$$

$$10 + 10 + 6 = 26$$

6 Draw arrows to subtract ten on the open number line.



7 Partition the duckies by circling groups of 4.



There are **5** groups of 4 duckies.

8

At Camp Woodland, they have 58 flashlights.
40 of the flashlights have batteries and the rest don't.

How many flashlights don't have batteries?

18 flashlights don't have batteries

$$58 - 40 = 18$$



Name: _____

DAY 101


1 What are three things you notice about the sentence below?

In the chilly wintertime, we made a funny snowman.

Answers will vary, but may include ideas such as: starts with a capital, ends with a period, compound words, adjectives, etc.



2 Circle the correct spelling for each picture.



sliem **slime** slim



chim **chime** chiem

slime

chime

3

grime

dirt that covers something

(noun)

The mirror is so coated with **grime** that I can't see anything!

What's wrong with the mirror?

It's covered with dirt.



4

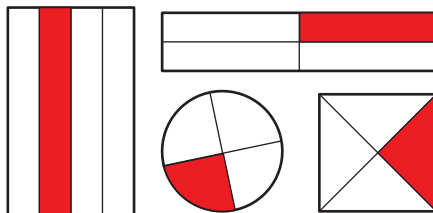
bring

b **r** **i** **n** **g**

b **r** **i** **n** **g**

b **r** **i** **n** **g**

5 Shade a fourth of each shape.



other answers are possible

6

6 hundreds + 1 hundred =

7 hundreds

600 + 100 = **700**

3 hundreds + 2 hundreds =

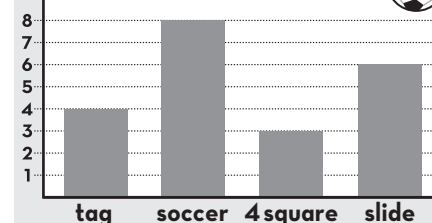
5 hundreds

300 + 200 = **500**

7

Write 2 things you notice about this bar graph.

Favorite Recess Activities



8

Miguel had 28 toy cars. For his birthday, he got some more.

Now he has 32 toy cars.

How many cars did he get for his birthday?

4 cars

28 + 4 = 32



answers will vary

Name: _____

DAY
102

1 Circle the 3 adjectives in each sentence.

In the **chilly** wintertime, we made a **funny** snowman with a **red** hat.
He likes **warm** milk, a **quick** hug, and a **long** story at bedtime.

Adjectives describe nouns.

2 Sort the words by their spelling pattern.

lie

pie

high

sigh

-igh

high
sigh

-ie

lie
pie

3

grime

dirt that covers
something

(noun)



What does **grime** have
to do with a broom?

ANSWERS WILL VARY

**[you might need a
broom to clean grime]**

4 Use context clues to find the
meaning of the underlined word.

**These are the prime
days of summer—it won't
get better than this!**

Prime means _____.

best

melt

5 Write combinations of 12.

12	
7	5

$12 - 7 = \underline{5}$

$5 + \underline{7} = 12$

$\underline{12} - 5 = 7$

12	
2	10

$\underline{12} - 10 = 2$

$12 - \underline{2} = 10$

$\underline{10} + 2 = 12$

6 Circle true statements.
Cross out false statements.


19 can be expressed as:

~~1 one, 9 tens~~

19 ones

1 ten 9 ones

7 Fill in the missing 5 minutes.



Draw the minute hand showing
that 25 minutes have passed
since the hour started.

8 The kids made 48 batches of slime at day camp. Some of the batches have glitter.
That left 39 batches of slime without glitter.

How many batches of slime have glitter?

9 batches of slime have glitter
48 - 9 = 39



Name: _____

DAY
103

1 Add adjectives to complete each sentence. Circle the noun each adjective describes.

The _____ bluebird hopped on the _____ tree.

ANSWERS WILL VARY

At nighttime, I saw the _____ moon and _____ stars.

2 Write the word that matches each picture.

prime

lime

dime

time



dime

lime

3

grime

dirt that covers something

(noun)



You might be covered in **grime** if...

ANSWERS WILL VARY

[if you step in the mud, you play outside, etc.]

4

short

s h o r t

s h o r t

s h o r t

5 Add.

1 + 9 = 10 1 + 19 = 20

4 + 6 = 10 4 + 16 = 20

7 + 3 = 10 17 + 3 = 20

What do you notice?

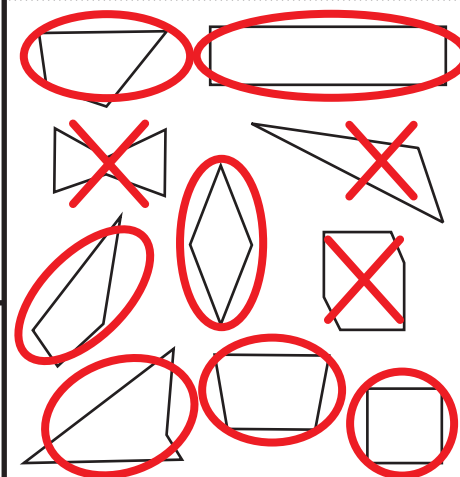
ANSWERS WILL VARY
[If you add a ten, the ones value doesn't change.]

6 Write the numeral.

6 hundreds **600**

11 ones
8 tens **91**

7 Circle all the quadrilaterals.
Cross out shapes that are NOT quadrilaterals.



Quadrilaterals are any polygon (shape) that has 4 straight sides and 4 angles.

8 Kurt bounced the paddle ball 31 times. That's 6 more times than Rachel.
How many times did Rachel bounce the paddle ball?

25 times
31 - 6 = 25



Name: _____

1 Rewrite the sentence correctly.

it's timme to re paint this old chair

DAY
104

It's time to repaint
this old chair.

2 Circle & write the word that has the same vowel sound as the picture.



sting
crisp
time

crisp



trick
think
chime

chime

3

grime

dirt that covers
something

(noun)



What is the best way to clean
up grime?

ANSWERS WILL VARY

4

(re-)

"back" or "again"

refill

prefix

base word

re

fill

definition

to fill again

5

Subtract.

$6 - 2 = \underline{4}$

$36 - 2 = \underline{34}$

$60 - 20 = \underline{40}$

$600 - 200 = \underline{400}$

6

Write numbers to make each
statement true.

$45 > \underline{\hspace{2cm}}$
is greater than

$45 < \underline{\text{ANSWERS}}$
is less than
WILL VARY

$98 > \underline{\hspace{2cm}}$
is greater than

$98 < \underline{\hspace{2cm}}$
is less than

7

At the bakery, 10 pies can fit
on a shelf.
How many pies can fit on 10
shelves?

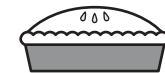
100 pies

10 groups of
10 is 100

8 Determine the value of the group of coins. Don't forget the cent sign ¢!



= 85¢



Name: _____

DAY
105

1 Write a sentence describing what you like to eat at lunchtime. Circle the adjectives.

ANSWERS WILL VARY

2 Write the two words that make up each compound word.

sometimes = some + times

lifetime = life + time

timeout = time + out

Combining 2 or more small words makes a compound word.

3 Draw a line to connect each word to the correct meaning.

<u>mend</u>	<u>slight</u>	<u>askew</u>
to fix something	crooked; not straight	very small

4 **place**

p l a c e

p l a c e

p l a c e

5 Solve.

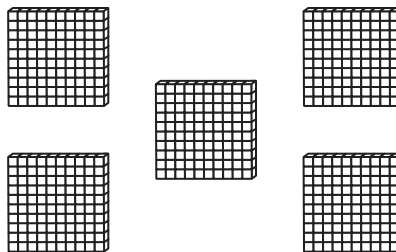
$$70 - 20 = 50$$

$$54 - 3 = 51$$

$$5 - 4 = 1$$

$$40 + 50 = 90$$

6 Write how many.



5 hundreds = **500**

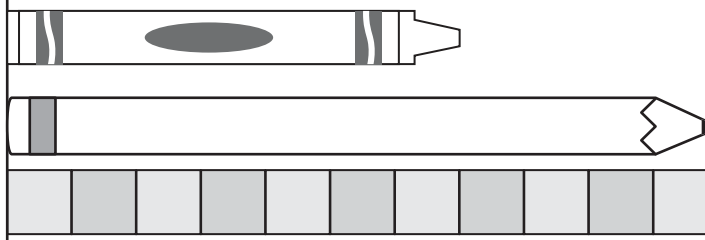
7 I flipped a dime 52 times.
12 times it landed head side up
and the rest it landed tail side
up.
**How many times did it land
tails?**

40 times
52 - 12 = 40

8 Each \square stands for 1 unit.

The crayon is about 7 units long.

The crayon is 4 units shorter than
the pencil.



Name: _____

DAY
106

1 What are three things you notice about the sentence below?

Gran's new Volkswagen van is so yellow and bright!

Answers will vary, but may include ideas such as: it starts with a capital, it's an exclamation, it has proper nouns, a possessive noun, adjectives, etc.



2 Circle the correct spelling for each picture.



ran

rane

rain



main

man

mane

ran

man

3

ban

to say people can't do something

(verb)

Mom banned slime from our house after I dropped some on the rug.

Can I have slime at my house?

No, Mom says I can't have it.



4

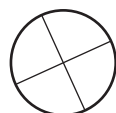
you'll

y o u ' l l

y o u ' l l

y o u ' l l

5 Label each partitioned shape halves or quarters.



quarters



halves



quarters

6

5 hundreds - 4 hundreds =

1 hundred

$$500 - 400 = \underline{100}$$

7 hundreds - 3 hundreds =

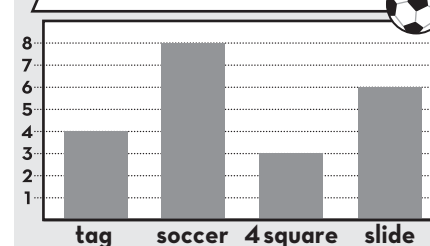
4 hundreds

$$700 - 300 = \underline{400}$$

7

Use the bar graph to answer the questions.

Favorite Recess Activities



4 kids chose tag

as their favorite recess activity.


3 kids chose 4 square

as their favorite recess activity.

8

There are 48 ants on a sandwich.
How many more need to come for there to be 54 ants?

6 more
48 + 6 = 54



Name: _____

DAY
107

1 Circle the 3 adjectives in each sentence.

Gran's **new** van is so **yellow** and **bright**!
Without a **strong** handle, this a **useless** **little** pan.

Adjectives describe nouns.

2 Sort the words by their spelling pattern.

fancy

fry

July

jelly

y = long e sound

fancy
jelly

y = long i sound

fry
July

3

ban

to say people can't
do something

(verb)



What does **ban** have
to do with rules?

ANSWERS WILL VARY

**[a rule might ban
something]**

4 Write a synonym from the box
for each bold word.

study discover beg

ask **beg**

find **discover**

learn **study**

Synonyms are words that have
about the same meaning.

5 Use 2 numbers in each group
to make 12.

7 4 8

$$12 = 4 + 8$$

6 5 6

$$12 = 6 + 6$$

6 Circle true statements.
Cross out false statements.


65 can be expressed as:

65 ones

4 tens 25 ones

~~6 ones 5 tens~~

7 Fill in the missing 5 minutes.



Draw the minute hand showing
that 0 minutes have passed
since the hour started.

8 There were some pans for sale at the store. 5 pans were sold and there are still 28 pans left.
How many pans were there to start with?

33 pans
33 - 5 = 28



Name: _____

DAY
108

1 Add adjectives to complete each sentence. (Circle) the noun each adjective describes.

The _____ **man** has a _____ **hat**.
ANSWERS WILL VARY
We ran to the _____ **store** for a _____ **treat**.

2 Write the word that matches each picture.

pan

tan

van

can



van

pan

4 **can't**

c a n ' t

c a n ' t

c a n ' t

5 Solve.

$$6 + 4 = \underline{10} \quad 16 + 4 = \underline{20}$$

How is adding $6 + 4$ like
adding $16 + 4$?

ANSWERS WILL VARY

**[changing the tens affects
the tens place]**

6 Write the numeral.

4 tens
5 ones

45

92 ones

92

7 Draw 2 different quadrilaterals.

**ANSWERS WILL
VARY**

8 The can of green olives has 35 olives. The can of black olives has 7 more olives than the green olive can.
How many black olives are in the can?

42 black olives
 $35 + 7 = 42$



How can you tell your shapes are quadrilaterals?

**They have 4 sides
and 4 angles.**

Name: _____

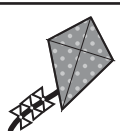
DAY
109

1 Rewrite the sentence correctly.

the rain spoild our fun friday planns!

The rain spoiled our fun Friday plans!

2 Circle & write the word that has the same vowel sound as the picture.



- type
- key
- milk

type



- tape
- have
- wait

have

3

~~~~~  
**ban**  
 ~~~~~  
 to say people can't
 do something
 (verb)



What is something you would like to **ban** if you could?

ANSWERS WILL VARY

4

(-less)

"without"

planless

base word

suffix

plan

less

definition

without a plan

5 Add.

$4 + 3 = \underline{7}$

$24 + 3 = \underline{27}$

$40 + 30 = \underline{70}$

$400 + 300 = \underline{700}$

6

Write numbers to make each statement true.

$53 > \underline{\hspace{2cm}}$
is greater than

$53 < \underline{\hspace{2cm}}$
is less than

$80 > \underline{\hspace{2cm}}$
is greater than

$80 < \underline{\hspace{2cm}}$
is less than

**ANSWERS
WILL VARY**

7

Each van needs 4 tires. I have 20 tires.

How many vans can I put tires on?

5 vans

20 is

5 groups of 4



8 Determine the value of the group of coins. Don't forget the cent sign ¢!



= **78¢**

Name: _____

DAY
110

1 Write a sentence describing a man. Circle the adjectives.

ANSWERS WILL VARY

2 Choose an adjective from the box to describe each noun.

cold many short sweet bumpy green

_____ apples _____ snacks
ANSWERS WILL VARY
_____ clouds _____ sheep

Adjectives describe nouns.

3 Draw a line to connect each word to the correct meaning.

~~slight~~

~~sway~~

~~grime~~

~~to move slowly back and forth~~

~~dirt that covers something~~

~~very small~~

4

how

h o w

h o w

h o w

5 Solve.


$$68 - 4 = 64$$

$$7 + 7 = 14$$

$$40 - 20 = 20$$


$$30 + 60 + 8 = 98$$

6 Write how many.



9 hundreds = 900

7



There are 6 groups of baseballs in a group.

There are 5 groups of baseballs

There are 30 baseballs altogether.

8

Mirabel ran in many races.
She won 6 of the races, but lost 25.
How many races has Mirabel run?

31 races
6 + 25 = 31



Name: _____

DAY
111

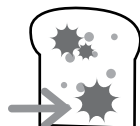
1 What are three things you notice about the sentence below?

They think he is old enough to play football with them.

Answers will vary, but may include ideas such as: starts with a capital, ends with a period, compound word, verb, adjectives, pronouns etc.



2 Circle the correct spelling for each picture.



goald golde **gold** **mold** mowld molde

gold

mold

3


bold

brave and
confident
(adjective)

That mouse was **bold** to run past the cat!

What is the mouse like?

It is brave and confident.



4

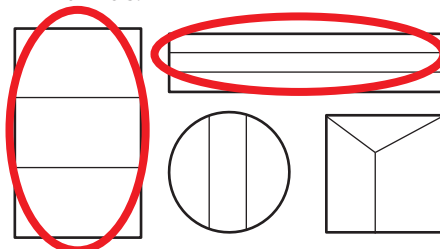
eat

e a t

e a t

e a t

5 Circle shapes that show thirds.



Thirds are three equal parts of a whole.

6

132

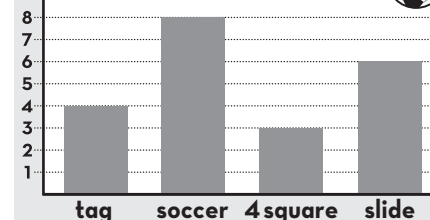
the digit **1** stands for 1 hundred or 100

the digit **3** stands for 3 tens or 30

the digit **2** stands for 2 ones or 2

7 Use the bar graph to answer the questions.

Favorite Recess Activities



The fewest kids chose

4 square their favorite.

The most kids chose


soccer as their favorite.

8

There were 17 goats. 11 goats came to join them.

How many goats are there now?

28 goats
17 + 11 = 28



Name: _____

DAY
112

1 Circle the 3 pronouns in each sentence.

They think **he** is old enough to play football with **them**.

She told **us** to come pick **it** up soon.

A pronoun is a word used in place of a noun.

2 Sort the words by their spelling pattern.

pond

bold

lost

most

short o

pond
lost

long o

bold
most

3

bold

brave and confident
(adjective)



What does **bold** have to do with singing in a talent show?

ANSWERS WILL VARY
[You might need to be bold to sing in a talent show.]

4 Use context clues to find the meaning of the underlined word.

When Mom sees the mess we made, she's going to scold us!

Scold means _____.

to talk in an angry way

to act like an old person

5 Write combinations of 13.

13	
10	3

$3 + 10 = 13$

$13 - 10 = 3$

$13 - 3 = 10$

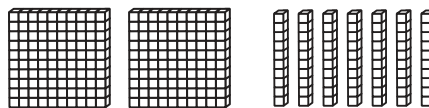
13	
6	7

$13 - 6 = 7$

$13 - 7 = 6$


$6 + 7 = 13$

6 Write the number shown by the blocks.




hundreds	tens	ones	=	
2	7	6		276

7 Count by 5 to tell how many **minutes** have passed.



10 minutes have passed since the hour started.



45 minutes have passed since the hour started.

8

Pasqual baked 58 loaves of bread.
After a few days, 12 of them grew mold.
How many loaves of bread are still good to eat?

46 loaves of bread
58 - 12 = 46



Name: _____

DAY 113


1 Begin each sentence with a pronoun.

PRONOUNS	
I	she
you	we
he	they

_____ said it's too cold.
ANSWERS WILL VARY
 _____ sold it to the old man.

2 Write the word that matches each picture.

fold cold hold told



fold

cold

3

bold
 brave and confident
 (adjective)



You would have to be **bold** to...

ANSWERS WILL VARY
[something that requires bravery or confidence]

4

old

o	l	d
o	l	d
o	l	d

5 Add.

$2 + 2 = 4$	$2 + 3 = 5$
$5 + 5 = 10$	$5 + 6 = 11$
$7 + 7 = 14$	$7 + 8 = 15$

What do you notice?

ANSWERS WILL VARY
 [If you know the doubles, the doubles +1 is easy to figure out.]

6 Write the numeral.

6 hundreds 2 tens 8 ones	628
3 hundreds 9 tens 5 ones	395

7 Circle pairs of parallel lines. Cross out lines that are NOT parallel.

EXAMPLES:

parallel	NOT parallel

8

Tess read 21 pages of a book. Christian read 25 pages.
 How many more pages did Christian read?

4 more pages
 $21 + 4 = 25$



Parallel lines are always the same distance apart--they will never touch!

Name: _____

DAY
114

1 Rewrite the sentence correctly.

she can holde her breath a long tim

**She can hold her breath
a long time. (or !)**

2 Circle & write the word that has the same vowel sound as the picture.



soft
love
old

old



lost
mold
rope

lost

3

bold

brave and
confident
(adjective)



When have you had to
be **bold**?

ANSWERS WILL VARY

4

(pre-)

"before"

preheat

prefix

base word

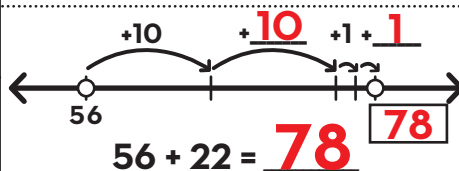
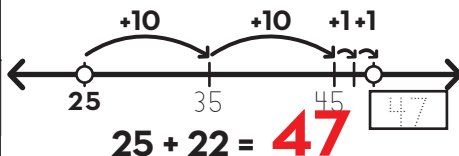
pre

heat

definition

to heat before

5 Make jumps of tens and ones to add 22.



6

Use symbols to compare the numbers.



> is greater than < is less than = is equal to

7

The pet store has 24 fish and 6 fish tanks. They want to put the same number of fish in each tank.

How many fish will they put in each fish tank?


4 fish

**6 groups of
4 is 24.**

8 Determine the value of the group of coins. Don't forget the cent sign ¢!



= **51¢**



Name: _____

DAY
115

1 Write about something you could teach me. Circle the pronouns.

ANSWERS WILL VARY

2 Choose an adjective from the box to describe each noun.

twenty dirty light cold colorful sad

_____ cakes _____ frogs
ANSWERS WILL VARY
_____ bubbles _____ teeth

Adjectives describe nouns.

3 Draw a line to connect each word to the correct meaning.

ban	grime	main
dirt that covers something	to say people can't do something	the most important

4 **even**

e	v	e	n
e	v	e	n
e	v	e	n

5 Solve.

$$\begin{aligned} 36 - 4 &= 32 \\ 67 - 20 &= 47 \\ 42 + 30 &= 72 \\ 86 + 2 &= 88 \end{aligned}$$

6 Write the missing numbers.

$\frac{200}{\text{part}}$	$\frac{700}{\text{whole}}$
500	
$\frac{300}{\text{part}}$	$\frac{400}{\text{whole}}$
100	

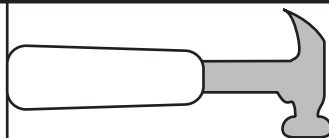
7 Wilder spent 75¢ on a poster and 14¢ on a folder.
How much did she spend in all?

$$75¢ + 14¢ = 89¢$$

8 Start at the dot. Draw a line that is 9 units long.

The hammer is about **5** units long.

Your line is **4** units longer than the hammer.



Name: _____

DAY
116

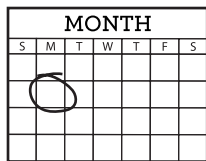
1 What are three things you notice about the sentence below?

I don't understand how you cut yourself with a dull spoon!

Answers will vary, but may include ideas such as: it starts with a capital, it's an exclamation, adjectives, noun, pronouns, verb, compound word, etc.



2 Circle the correct spelling for each picture.



soone **soon** sune



noone newn **noon**

soon

noon

3

croon

to use a soft, low voice

(verb)

"You're okay," she crooned to the scared puppy.

How did she talk to the puppy?



She used a soft, low voice.

4

light

l i g h t

l i g h t

l i g h t

5

There are 6 kids. Each one wants half an apple for a snack.

How many whole apples do they need?

3 whole apples



6

785

the digit 7 stands for 7 hundreds or **700**

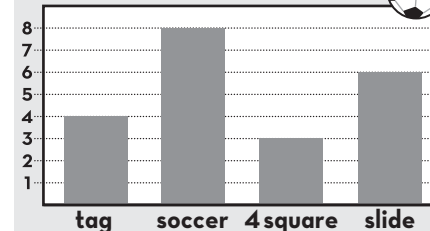
the digit **8** stands for 8 tens or 80

the digit 5 stands for **5** ones or 5

7

Use the bar graph to answer the questions.

Favorite Recess Activities



3 fewer kids chose 4 square than chose slides.

Together, tag and soccer were picked by **12** kids.

8

Oonagh had 28 state quarters in her coin collection. Then she got 12 more.

How many quarters does she have now?

40 quarters $28 + 12 = 40$

How many more does she need to have all 50 state quarters?

10 more $40 + 10 = 50$



Name: _____

DAY
117

1 Circle the 3 pronouns in each sentence.

I don't understand how you cut yourself with a dull spoon!
We made the snowman ourselves but the sun will soon melt it.

A pronoun is a word used in place of a noun.

2 Sort the words by their spelling pattern.

good

loop

soon

book

short oo (cook)

long oo (cool)

good
book

loop
soon

3

~~~~~  
**croon**  
~~~~~

to use a soft, low
voice

(verb)



What does **croon** have
to do with a lullabye?

ANSWERS WILL VARY

**[you use a soft, low voice
to sing a lullabye]**

4 Finish the sentence with the
stronger synonym.

get

grab

Grab the spoon!

*Synonyms mean almost the same thing,
but some have a stronger meaning.*

5 Use 2 numbers in each group
to make 13.

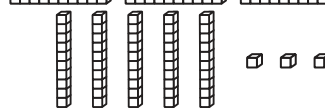
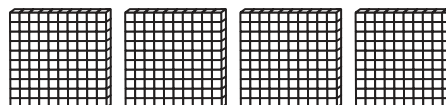
9 4 2

$$13 = 9 + 4$$

5 7 8


$$13 = 5 + 8$$

6 Write the number shown by
the blocks.




hundreds	tens	ones	=
4	5	3	453

7 Count by 5 to tell how many
minutes have passed.



30 minutes have passed
since the hour started.



50 minutes have passed
since the hour started.

8 Delroy blew up 47 balloons. Carol popped 31 of them and the rest blew away.
How many balloons blew away?

16 balloons blew away
47 - 31 = 16



Name: _____

DAY
118

1 Complete each sentence with matching pronouns.

PRONOUNS

I - myself you - yourself
she - herself we - ourselves
he - himself they - themselves

_____ drew the cartoon _____ .
ANSWERS WILL VARY
_____ saw the racoon for _____ .

2 Write the word that matches each picture.

noon

swoon

moon

spoon



spoon

moon

4 **cool**

c o o l

c o o l

c o o l

5 Solve.

$4 + 4 = \underline{8}$ $4 + 5 = \underline{9}$

How is adding $4 + 4$ like
adding $4 + 5$?

ANSWERS WILL VARY

**[it's just one more, since 5
is one more than 4]**

6 Write the numeral.

9 hundreds
0 tens
1 one **901**

4 hundreds
7 tens
2 ones **472**

7 Draw 2 different pairs of parallel lines.

ANSWERS WILL VARY

How can you tell your lines are parallel?

8 The restaurant has 39 spoons and 14 forks.
How many more spoons do they have than forks?

25 more spoons
 $39 - 14 = \underline{25}$



Parallel lines are always the same distance apart--they will never touch!

Name: _____

DAY
119

1 Rewrite the sentence correctly.

what if you were on the moone by yourself

What if you were on the moon by yourself?

2 Circle & write the word that has the same vowel sound as the picture.



pool
wood
soon

wood



foot
look
hoop

hoop

3

What would be a good song to **croon**?

croon

to use a soft, low voice

(verb)



ANSWERS WILL VARY

4

(-ly)

"in a certain way"

coolly

base word

suffix

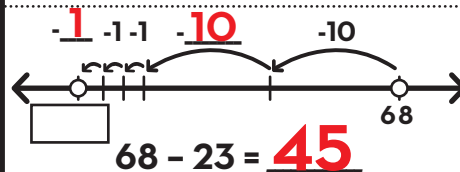
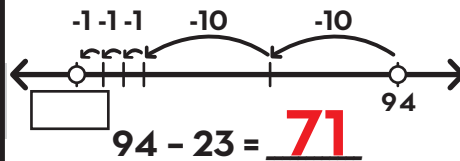
cool

ly

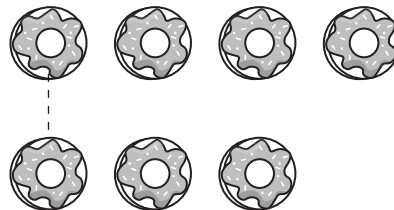
definition

in a cool way

5 Make jumps of tens and ones to subtract 23.



6 Draw lines to pair up pictures. Is it an even or odd amount?



7 is an **odd** number.
even or odd

7 At the shoe store, 10 boots fit on a rack.
How many racks are needed to hold 68 boots?

7 racks

60 = 6 groups of 10 plus 1 rack for the last 8 boots.



8 Determine the value of the group of coins. Don't forget the cent sign ¢!



= **63¢**

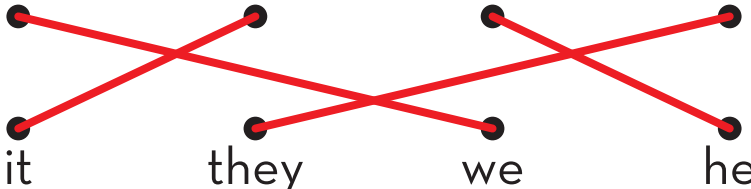
Name: _____

DAY
120

1 Write a sentence telling something you do to take care of yourself. Circle the pronouns.

ANSWERS WILL VARY

2 Draw lines to match the words with the correct pronoun.

Ann and I a car Fred the kids

it they we he

A pronoun is a word used in place of a noun.

3 Draw a line to connect each word to the correct meaning.

heed

bold

ban

to say people can't do something

to pay attention to something

brave and confident

4

soon

s o o n

s o o n

s o o n

5 Solve.

$$63 - 8 = 55$$

$$56 - 30 = 26$$

$$12 + 6 = 18$$

$$40 + 7 + 40 = 87$$

6 Write the missing numbers.

200
part

100
part


300
whole

300
part

600
part

900
whole

7 Partition the 15 turtles by circling groups of 5.



There are 3 groups of 5 turtles.

8

Boone cleaned his bedroom for 41 minutes. He spent 15 minutes longer cleaning his bathroom than he spent on his bedroom.

How long did he spend cleaning his bathroom?

56 minutes

$$41 + 15 = 56$$



Name: _____

DAY
121

1 What are three things you notice about the sentence below?

If you hadn't broiled the oatmeal, it wouldn't have burned!

Answers will vary, but may include ideas such as: starts with a capital, ends with an exclamation, compound word, past tense verbs, contractions, pronouns etc.



2 Circle the correct spelling for each picture.



spoil

spool

spoyl



boyl

boil

boile

spoil

boil

3

coil


to wind around
in circles

(verb)

The snake **coiled** up
in the sunshine.

What is the snake doing?

**It is wound around
in circles.**



4

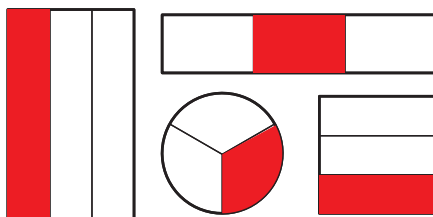
wait

w a i t

w a i t

w a i t

5 Shade a third of each shape.



Other answers are
possible.

6

141

1 hundred 4 tens 1 one
100 + **40** + **1**

306

3 hundreds 0 tens 6 ones
300 + **0** + **6**

7 Write 2 things you notice
about this pictograph.

Slices of Watermelon Eaten

Alexis	
David	
Moira	

KEY:

= 1 slice

8

The boy has 45 coins. He earns 23 more.

How coins does he have now?

68 coins $45 + 23 = 68$

How many more does he need to earn to have 75 coins?

7 more $68 + 7 = 75$



**answers
will vary**

Name: _____

DAY
122

1 Circle the 2 contractions in each sentence.

If you **hadn't** broiled the oatmeal, it **wouldn't** have burned!
The baby **won't** fall asleep if you **don't** use a softer voice.

A contraction combines 2 words with an apostrophe to replace the missing letters.

2 Sort the words by their spelling pattern.

coin

enjoy

point

cowboy

-oi

coin
point

-oy

enjoy
cowboy

3

coil

to wind around
in circles
(verb)



What does **coil** have
to do with a long scarf?

ANSWERS WILL VARY
[It will need to be coiled
around your neck.]

4 Use context clues to find the
meaning of the underlined word.

Your hands are very
dirty after digging in
the soil!

Soil means _____.

river

dirt

5 Write combinations of 14.

14		14	
8	6	4	10

$14 - \underline{8} = 6$

$\underline{10} + 4 = 14$

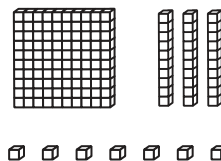
$8 + \underline{6} = 14$

$14 - \underline{4} = 10$

$\underline{14} - 6 = 8$


$4 + 10 = \underline{14}$

6 Write the number shown by
the blocks.



hundreds	tens	ones	
1	3	7	= 137

7 Count by 5 to tell how many
minutes have passed.




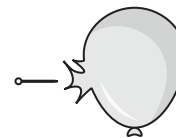
20 minutes have passed
since the hour started.

8

There were 33 balloons.
13 of them popped.

How many balloons are left?

20 balloons are left
33 - 13 = 20



5 or
05 minutes have passed
since the hour started.

Name: _____

DAY
123



1 Complete each sentence using a contraction with not.

CONTRACTIONS	
didn't	couldn't
wouldn't	won't
can't	shouldn't

She _____ say that.
ANSWERS WILL VARY
 He _____ come here.

2 Write the word that matches each picture.

foil soil coil boil




coil

foil

3

coil
 to wind around
 in circles
 (verb)



I **coiled** up the long...

ANSWERS WILL VARY
**[cord, rope, hose,
 hair, scarf, etc.]**

4

them

t h e m

t h e m

t h e m

5 Add.

$3 + 3 = 6$ $3 + 2 = 5$

$4 + 4 = 8$ $4 + 3 = 7$

$8 + 8 = 16$ $7 + 8 = 15$

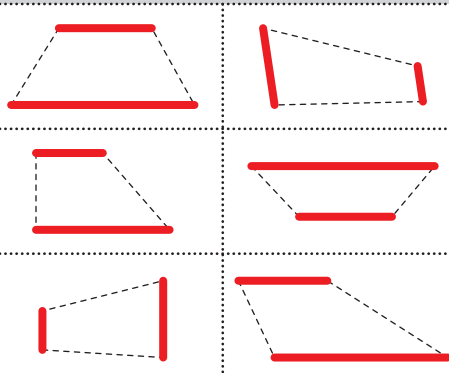
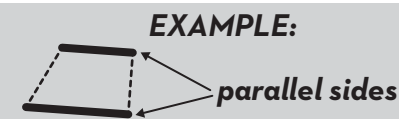
What do you notice?
ANSWERS WILL VARY
**[If you know the doubles, the doubles -1
 is easy to figure out.]**

6 Write the numeral.

7 hundreds
 0 tens
 2 ones **702**

3 hundreds
 3 tens
 5 ones **335**

7 Trace the parallel sides on each trapezoid.



Parallel sides are always the same distance apart.

8

Troy scored 39 points in the basketball game. Chad scored 21 points.
How many more points did Troy score than Chad?

18 more points
 $39 - 21 = 18$



Name: _____

DAY
124

1 Rewrite the sentence correctly. mom doesnt like us to boyl water

**Mom doesn't like us to
boil water. (or !)**

2 Circle & write the word that has the same vowel sound as the picture.



boss
fold
from

boss



owl
boy
old

boy

3

coil

to wind around
in circles
(verb)



What would you do if you saw
a **coiled** snake?

ANSWERS WILL VARY

4 **(mid-)**

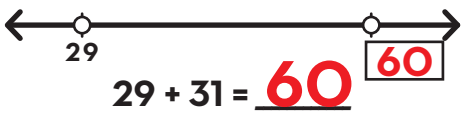
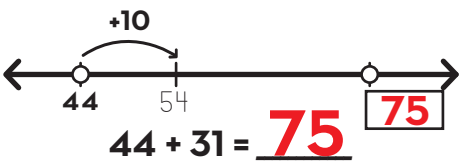
"near the middle of"

midwinter

prefix base word
mid **winter**

definition
**near the middle of
winter**

5 Make jumps of tens and ones
to add 31.



6 Use symbols to compare the
numbers.

92 > 89

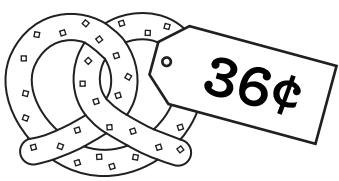
16 < 61

> is greater than < is less than = is equal to

7 One child has 20 teeth.
If there are 3 children, how
many teeth are there?

60 teeth
**3 groups of
20 is 60.**

8 Draw the coins needed to pay for the item.



ANSWERS WILL VARY



Name: _____

DAY
125

1 Write about something you shouldn't do. Circle the contraction.

ANSWERS WILL VARY

2 Draw lines to match the words with the correct pronoun.

you	we	she	I
●	●	●	●
●	●	●	●
ourselves	myself	yourself	herself

(Red lines connect 'you' to 'myself', 'we' to 'ourselves', 'she' to 'herself', and 'I' to 'yourself')

A pronoun is a word used in place of a noun.

3 Draw a line to connect each word to the correct meaning.

bold	mellow	croon
calm and relaxed; not loud or irritating	brave and confident	to use a soft, low voice

(Red lines connect 'bold' to 'brave and confident', 'mellow' to 'calm and relaxed; not loud or irritating', and 'croon' to 'to use a soft, low voice')

4 **watch**

w	a	t	c	h
w	a	t	c	h
w	a	t	c	h

5 Solve.

$$\begin{aligned} 78 + 20 &= 98 \\ 39 + 4 &= 43 \\ 20 + 30 &= 50 \\ 18 - 10 &= 8 \end{aligned}$$

6 Write the missing numbers.


400 part	800 whole
<u>400</u> part	
500 part	600 whole
<u>100</u> part	

7 Moises baked 20 sugar cookies and 14 chocolate chip cookies. Roy baked 12 sugar cookies. **How many chocolate chip cookies does he need to bake to have the same number of cookies as Moira?**

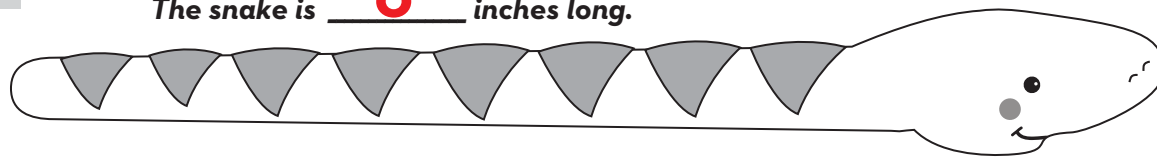
22 cookies

Moises: $20 + 14 = 34$

Roy: $12 + 22 = 34$



8 The snake is **6** inches long.



Name: _____

DAY
126

1 What are three things you notice about the sentence below?

It's careless to leave Blair's baseball where I'll trip on it!

Answers will vary, but may include ideas such as: it starts with a capital, it's an exclamation, adjective, possessive noun, contractions, verb, compound word, etc.




2 Circle the correct spelling for each picture.



stair steer **stare** **share** shair shear

stare



share

3

glare

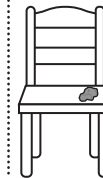
to look at someone in an angry way

(verb)

Mom **glared** at Aizen when she found the gum he stuck to the chair.

How did Mom look at Aizen?

She looked at him in an angry way.



4

never

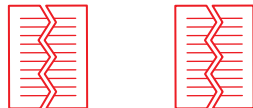
n e v e r

n e v e r

n e v e r

5 There are 4 kids. Each one needs half a paper for an art project.
How many whole papers do they need?

2 whole papers



6

711

7 hundreds **1** ten **1** one
700 + 10 + 1

925

9 hundreds **2** tens **5** ones
900 + 20 + 5

7 Use the pictograph to answer the questions.

Slices of Watermelon Eaten

Alexis	
David	
Moira	

KEY:

= 1 slice

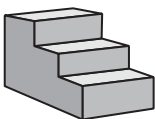
Alexis ate the most slices of watermelon.

4 slices of watermelon were eaten by **David**.

8

I climbed 60 stairs, but I have 36 more to go to reach the top.
How stairs are there in all?

96 stairs
60 + 36 = 96



Name: _____

DAY
127

1 Circle the contractions in each sentence.

It's careless to leave Blair's baseball where **I'll** trip on it!
We've never played so well and **it's** all because **you're** here!

A contraction combines 2 words with an apostrophe to replace the missing letters.

2 Sort the words by their spelling pattern.

scare

repair

chair

spare

-air

repair
chair

-are

scare
spare

3

glare

to look at someone
in an angry way

(verb)



What does **glare** have
to do with being mad at someone?

ANSWERS WILL VARY

**[If you're mad at
someone, you might
glare at them.]**

4 Finish the sentence with the
strongest synonym.

look peek stare

All I can do is

stare

at the screen!

*Synonyms mean almost the same thing,
but some have a stronger meaning.*

5 Use 2 numbers in each group
to make 14.


6 7 7

$$14 = 7 + 7$$

5 9 8


$$14 = 5 + 9$$

6 Write the number shown by
the blocks.



hundreds	tens	ones	=
7	5	0	750

7 Count by 5 to tell how many
minutes have passed.




40 minutes have passed
since the hour started.

8

There were 36 hares in the meadow. 12 hop away.

How many hares are still in the meadow?

24 hares are left
36 - 12 = 24



0 or 00 minutes have passed
since the hour started.

Name: _____

DAY
128


1 Complete each sentence using a contraction.

CONTRACTIONS	
he's	I'm
she's	you're
it's	that's

_____ the one we want.
ANSWERS WILL VARY
 _____ not going to work.

2 Write the word that matches each picture.

- care hare square mare



hare

square

4 **found**

f	o	u	n	d
f	o	u	n	d
f	o	u	n	d

5 Solve.

$7 + 7 = \underline{14}$ $7 + 6 = \underline{13}$

How is adding $7 + 7$ like adding $7 + 6$?

ANSWERS WILL VARY

[it's just one less, since 6 is one less than 7]

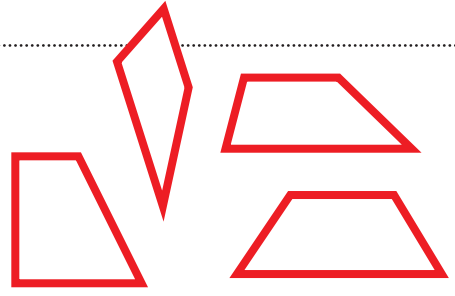
6 Write the numeral.

4 hundreds	460
6 tens	
0 ones	

8 hundreds	813
1 ten	
3 ones	

7 Draw 2 different trapezoids. Circle the parallel sides.

ANSWERS WILL VARY
examples:



Trapezoids are quadrilaterals with one pair of parallel lines.

8 At school, 53 students have brown hair. 31 children have blonde hair. How many fewer children have blonde hair than brown hair?

22 fewer have blonde hair

$53 - 31 = \underline{22}$



Name: _____

DAY
129

1 Rewrite the sentence correctly.

they wont cair if youre a little late


**They won't care if you're
a little late.**

2 Circle & write the word that has the same vowel sound as the picture.



blast
bank
crawl

blast



paint
chair
near

chair

3

glare

to look at someone
in an angry way

(verb)



What might make your teacher **glare**?

ANSWERS WILL VARY

4

(-er)

"a person who does something"

leader

base word

lead

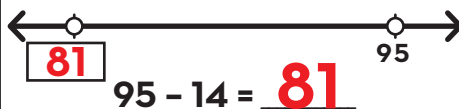
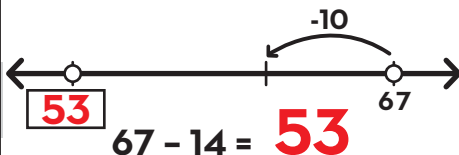
suffix

er


definition

a person who leads

5 Make jumps of tens and ones
to subtract 14.



6 Draw lines to pair up pictures.
Is it an even or odd number?




4 is an **even** number.
even or odd

7 I drew a bunch of squares.
One square has 4 sides.
In all, I drew 20 sides.
How squares did I draw?

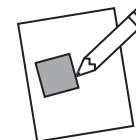
5 squares

**20 = 5 groups
of 4**

8 Draw the coins needed to pay for the item.



ANSWERS WILL VARY



Name: _____

DAY
130

1 Write a sentence telling something you'll do later. Use the contraction I'll. Circle the contraction.

ANSWERS WILL VARY

2 Write the 2 words that make up each contraction.

didn't = did + not

haven't = have + not

couldn't = could + not

A contraction combines 2 words with an apostrophe.

3 Draw a line to connect each word to the correct meaning.

askew

croon

coil

to use a soft, low
voice

to wind around
in circles

crooked; not straight

4

stay

s t a y

s t a y

s t a y

5 Solve.

$$65 - 13 = 52$$

$$3 + 5 = 8$$

$$17 + 40 = 57$$

$$20 + 5 + 25 = 50$$

6 Write the missing numbers.

200
part

500
whole


300
part

100
part

100
part

200
whole

7



There are 8 grapes
in a bunch.

There are 3 bunches
of grapes.

$$8 + 8 + 8 = 24$$

8

There are 28 chairs in the classroom. Most chairs are red, but 11 are blue.

How many of the chairs are red?

17 chairs are red

$$28 + 17 = 11$$



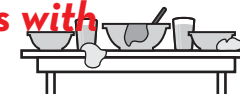
Name: _____

DAY
131


1 What are three things you notice about the sentence below?

We'd be nearly done cleaning if you'd cleared the table!

Answers will vary, but may include ideas such as: starts with a capital, ends with an exclamation, contractions, pronouns, past tense verb, adverbs etc.



2 Circle the correct spelling for each picture.



feer **fear** fere **spear** spere speer

fear



spear

3

smear

to spread something in a messy way

(verb)



She **smear**ed butter on her bread.

What did she do with the butter?

She **spread the butter** in a messy way.

4

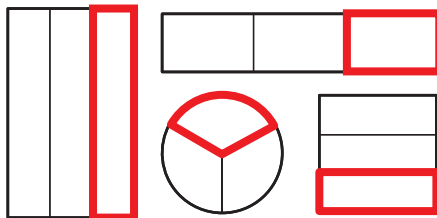
since

s i n c e

s i n c e

s i n c e

5 Draw the missing third of each shape.



Thirds are three equal parts of a whole.

6

201

2 hundreds 0 tens 1 one
200 + **0** + **1**

885

8 hundreds 8 tens 5 ones
800 + **80** + **5**

7 Use the pictograph to answer the questions.

Slices of Watermelon Eaten

Alexis	
David	
Moira	

KEY:
 = 1 slice

Moira ate the fewest slices of watermelon.

6 slices of watermelon were eaten by **Alexis**.

8

Captain Blackbeard has 27 chests of gold. He gets 33 more chests.

How many chests of gold does he have now?



60 chests of gold $27 + 33 = \underline{60}$

Name: _____

DAY
132

1 Circle the 2 contractions in each sentence.

We'd be nearly done cleaning if you'd cleared the table!
If he's going to get the gum out of his beard, he'll have to trim it.

A contraction combines 2 words with an apostrophe to replace the missing letters.

2 Sort the words by their spelling pattern.

steer cheer clear year

-ear

clear
year

-eer

steer
cheer

3

smear

to spread something in a messy way (verb)



What does **smear** have to do with fingerpainting?

ANSWERS WILL VARY
[You smear the paint if you're fingerpainting.]

4 Use context clues to find the meaning of the underlined word.

She peered into the dark closet to find her lost shoe.

Peered means _____.

- looked
- shouted

5 Write combinations of 15.

15		15	
5	10	9	6


15 - 5 = 10 9 + **6** = 15
 15 - **10** = 5 15 - 6 = **9**
 10 + **5** = 15 **15** - 9 = 6

6 Write the number in different forms.


430 can be written as:

4 hundreds **3** tens
or **43** tens
or **430** ones


7 Tell the time.



The hour hand is in the **4** o'clock space.



30 minutes have passed since the hour started.



The time is: **4:30**

8

There were 51 deer in meadow. 22 of them ran over the hill.
How many deer are still in the meadow?



29 deer are still in the meadow
51 - 22 = 29

Name: _____

DAY
133

1 Complete each sentence using a contraction with will.

CONTRACTIONS

I'll	we'll
you'll	they'll
she'll	it'll

_____ be here soon!
ANSWERS WILL VARY
 _____ have no fear of it.

2 Write the word that matches each picture.

tear

hear

gear

year



hear

gear

3

smear

to spread something in a messy way (verb)



On the walls, the children had **smear**ed...

ANSWERS WILL VARY

[paint, marker, jam, chocolate, etc.]

4

forgot

f o r g o t

f o r g o t

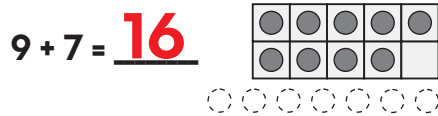
f o r g o t

5 Make a 9 into a 10 to add.

9 + 5 is the same as 10 + 4



9 + 7 is the same as 10 + 16



6 Write the numeral.

1 hundred
 2 tens
 4 ones

124

8 hundreds
 5 tens
 0 ones

850

7 Trace the parallel sides on each parallelogram.

OPPOSITE PARALLEL SIDES:



Parallelograms are quadrilaterals with opposite sides that are parallel and the same length.

8

Grandma's red earrings cost \$55. Her gold earrings cost \$70.

How much less did she spend on the red earrings?

15 fewer dollars
\$70 - \$55 = \$15



Name: _____

DAY
134

1 Rewrite the sentence correctly.

Hes tried everything to cleer his ears!

**He's tried everything to
clear his ears!**

2 Circle & write the word that has the same vowel sound as the picture.



herd
trip
deer

deer



wheel
bread
great

wheel

3

smear

to spread
something in a
messy way
(verb)



What would you **smear** on your toast?

ANSWERS WILL VARY

4

(dis-)

"not" or "opposite of"

disconnect

prefix

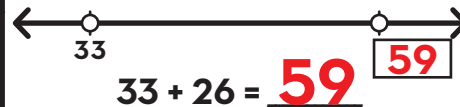
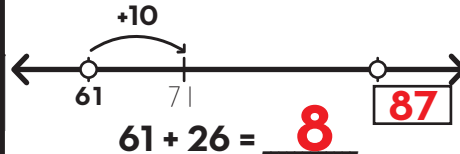
base word

dis connect

definition


not connected

5 Make jumps of tens and ones to add 26.



6

Use symbols to compare the numbers.



> is greater than < is less than = is equal to

7

One person has 2 ears.
How many people are here if
there are 20 ears?

40 ears

**20 groups of
2 is 40.**

8 Draw coins to show 2 different ways to make 35¢.

35¢

ANSWERS WILL VARY

35¢



Name: _____

DAY
135

1 Write about something you're happy about. Use the contraction I'm. Circle the contractions.

ANSWERS WILL VARY

2 Form a contraction with the words.

she + will = she'll

you + will = you'll

that + will = that'll

A contraction combines 2 words with an apostrophe.

3 Draw a line to connect each word to the correct meaning.

<u>glare</u>	<u>slight</u>	<u>coil</u>
to wind around in circles	to look at someone in an angry way	very small

4 **move**

m o v e

m o v e

m o v e

5 Solve.

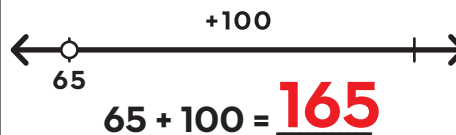
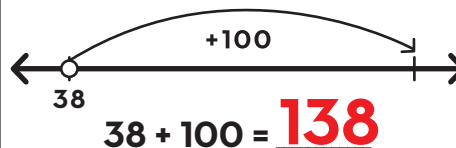
$$66 + 20 = 86$$

$$200 + 300 = 500$$

$$30 - 20 = 10$$

$$400 + 60 = 460$$

6 Draw arrows to add a hundred on the open number line.

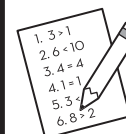


7 Ameera has 42 problems on her homework. So far she has finished 29 problems. **How many more problems does she need to solve?**

13 problems

$$42 - 29 = 13$$

8 The toothpick is 2 inches long. The straw is 5 inches longer than the toothpick.





>> Terms of Use <<

The original purchaser of this document is hereby granted permission to reproduce this document specifically for teaching purposes in a single classroom. If you are NOT the original purchaser, please download the item from my store on Teachers Pay Teachers before making any copies. Redistributing, editing, selling, or posting this item or any part thereof on the Internet is strictly prohibited without first gaining permission from the author. Violations are subject to the penalties of the Digital Millennium Copyright Act.

Please contact us if you wish to be granted special permission or if you have a question about the usage of this product.

>> Which Means? <<

You **CANNOT** copy this resource for others...
but you **CAN** tell them all about it!

You **CANNOT** put a copy of this resource online...
but you **CAN** link to the item in our store!

You **CANNOT** change or sell this resource...because, well, c'mon! It took a long time and a lot of effort for us to make it!

THANK YOU

FOR YOUR DOWNLOAD!



SHOP

Hello there! We are a set of sisters who are the brains behind the 'Second Story Window' brand. We are both former 2nd grade teachers and current preschool teachers with a combined 17 years experience in the classroom. We love to make life just a little easier for teachers by designing curriculum that is both rigorous and easy-to-use!

Emily & Heidi

TRANSFORM YOUR

Word Work INTO Word Play

- A COMPREHENSIVE PHONICS CURRICULUM -

Ready to take your word work to the next level?

CLICK THE BUTTON BELOW TO TRY OUT OUR PHONICS CURRICULUM... COMPLETELY FREE!

I WANT WORD PLAY!

