

Name: _____

DAY 136

1 What are three things you notice about the sentence below?

I secretly ate a bite of Mel's cake, but I barely touched it!



2 Circle the correct spelling for each picture.



invit invite invight



wight wite white

3

quite

very

(adverb)

It was springtime, but it felt **quite** hot outside.

How did it feel outside?



4

I've

I '

 v

5 I need a fourth of an orange to make a snack.
How many snacks can I make with 2 whole oranges?



6

970

_____ hundreds _____ tens _____ ones

_____ + _____ + _____

43

_____ hundreds _____ tens _____ ones

_____ + _____ + _____

7 Use the pictograph to answer the questions.

Slices of Watermelon Eaten

Alexis	
David	
Moira	

KEY:
 = 1 slice

_____ ate 2 fewer slices than Alexis.

Together, Alexis and Moira ate _____ slices of watermelon.

8

Mrs. Clive put 24 pink flamingos in her yard. Then she put out 18 more.
How many flamingos are in her yard now?

The wind blew down 10. How many flamingos are left?



Name: _____

DAY
137

1 Underline the 2 verbs in each sentence. Circle the adverbs that describe the verbs.

I secretly ate a bite of Mel's cake, but I barely touched it!
I invited him yesterday, but he politely said no.

Adverbs can describe verbs. They tell how, where, and when things happen.

2 Sort the words by their spelling pattern.

wire

drier

fire

pliers

-ier

-ire

3

quite

very
(adverb)



What does it mean to do something **quite** well?

4 Finish the sentence with the strongest synonym.

gobble **chew** **bite**

I'm so hungry I'm going to

every crumb of bread!

Synonyms mean almost the same thing, but some have a stronger meaning.

5 Use 2 numbers in each group to make 15.

8 **7** **6**

15 = +

9 **11** **4**

15 = +

6 Write the number in different forms.


670 can be written as:

_____ hundreds _____ tens


or _____ tens

or _____ ones


7 Tell the time.



The hour hand is in the _____ o'clock space.



_____ minutes have passed since the hour started.



The time is:

_____ : _____

8

52 people are flying kites in the park. 23 of the people leave.

How many people are still flying kites?



Name: _____

DAY 138

1 Add an adverb to complete each sentence. Underline the verb each adverb describes.

ADVERBS that tell HOW

quickly	joyfully	easily
quietly	dimly	boldly
slowly	closely	wildly

The kite blew _____ in the breeze.

That white marker draws _____.

2 Write the word that matches each picture.

white

spite

bite

write



3

I live **quite** near...

quite

very
(adverb)



4

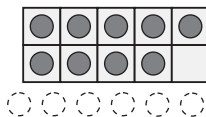
their

t	h				
					r

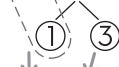
5 Make a 9 into a 10 to add.

9 + 6 is the same as 10 + _____

9 + 6 = _____



9 + 4 = _____



10 + 3 = _____

9 + 8 = _____



10 + 7 = _____

6 Write the numeral.

9 hundreds
1 ten
3 ones

___ hundreds
___ tens
___ ones

762

7 Trace the parallel sides.
Circle the shape's name.



trapezoid
parallelogram



trapezoid
parallelogram



trapezoid
parallelogram



trapezoid
parallelogram

Trapezoid = 1 pair of parallel sides
Parallelogram = 2 pairs of parallel sides

8 Tyshawn invited 45 people to the school play. Irelee invited 26 people.
How many more people did Tyshawn invite?



Name: _____

DAY
139

1 Rewrite the sentence correctly.

quickly write her a letter and ill mail it today

2 Circle & write the word that has the same vowel sound as the picture.



think
child
print



bird
their
crier

3

quite

very
(adverb)



What might make you feel **quite** surprised?

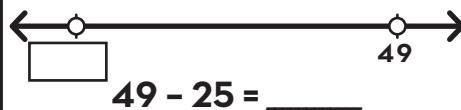
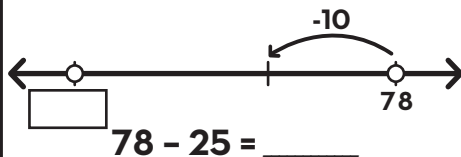
4

(-un)

“not” or “to remove”

Are you **unhappy** if you get a present? Why or why not?

5 Make jumps of tens and ones to subtract 25.



6 Draw lines to pair up pictures. Is it an even or odd amount?



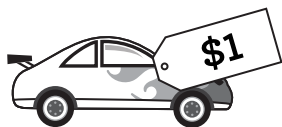
10 is an _____ number.
even or odd

7 I can eat a cracker in 4 bites. I ate 4 crackers. **How many bites did I take?**

8

The car costs 1 dollar. I have 100 pennies.
Do I have enough to pay for the car?

How do you know?



Name: _____

DAY
140

1 Write a sentence telling something you do happily. Circle the adverbs.

2 Form a contraction with the words.

we + had = _____

I + would = _____

they + are = _____

A contraction combines 2 words with an apostrophe.

3 Draw a line to connect each word to the correct meaning.

ban

smear

glare

to say people can't do something

to look at someone in an angry way

to spread something in a messy way

4 **always**

a l a s

w s

5 Solve.

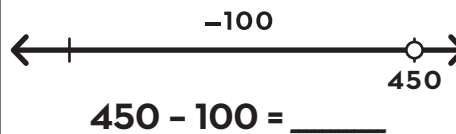
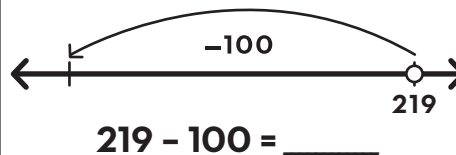
$500 - 300 = \bigcirc$

$700 + \bigcirc = 780$


$\bigcirc + 12 = 20$

$50 + 50 + 50 = \bigcirc$

6 Draw arrows to subtract 100 on the open number line.



7 Partition 12 starfish by circling groups of 6.



There are _____ groups of 6 starfish.

8 There are 24 roses in the vase. 16 are red and the rest of the roses are white.
How many of the roses are white?



Name: _____

DAY
141

1 What are three things you notice about the sentence below?

He snores loudly, but I just ignore him.



2 Circle the correct spelling for each picture.



chore choar chor



boar bor bore

3

adore

to love something
very much

(verb)

The baby is so cute and I
adore his little laugh!

How do I feel about the baby's laugh?



4

wore

			r	
--	--	--	---	--

w				
---	--	--	--	--

--	--	--	--	--

5 Label each partitioned shape
halves, thirds, or quarters.







6

18

_____ hundreds _____ ten _____ ones

_____ + _____ + _____

960

_____ hundreds _____ tens _____ ones

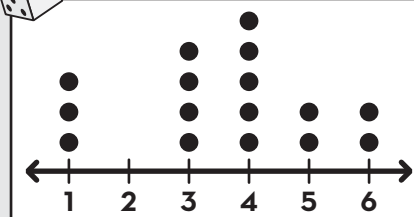
_____ + _____ + _____

7

Write 2 things you notice
about this dot plot.



Numbers Rolled on a Die



8

There are 51 birds in the forest. 23 more birds come.

How many birds are in the forest now?



Name: _____

DAY
142

1 Underline the 2 verbs in each sentence. Circle the adverbs that describe the verbs.

He snores loudly, but I just ignore him.
I only wore that shirt for a minute and I already tore a hole in it.

Adverbs can describe verbs. They tell how, where, and when things happen.

2 Sort the words by their spelling pattern.

roar

more

wore

soar

-oar

-ore

3

adore

to love something
very much

(verb)



What does **adore** have
to do with your favorite toy?

4 Use context clues to find the
meaning of the underlined word.

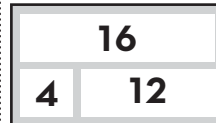
At the emporium, we
got some new shoes
and shirts.

Emporium means _____.

beach

store

5 Write combinations of 16.



16 - _____ = 8 _____ + 12 = 16

8 + _____ = 16 16 - _____ = 4

_____ - 8 = 8 12 + 4 = _____

6 Write the number in different
forms.


510 can be written as:

_____ hundreds _____ ten


or _____ tens

or _____ ones


7 Tell the time.



The hour hand is
in the _____
o'clock space.



_____ minutes
have passed since
the hour started.



The time is:

_____ : _____

8

The store had 61 whistles. Some of the whistles were sold.

There are still 38 whistles at the store.

How many whistles were sold?



Name: _____

DAY
143

1 Add an adverb to complete each sentence. Underline the verb each adverb describes.

ADVERBS that tell WHEN

today later tonight
next year soon next week
before tomorrow then

We'll visit the seashore _____.

My chores will be finished _____.

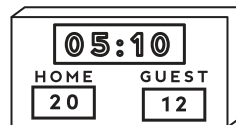
2 Write the word that matches each picture.

score

sore

store

shore



3

adore

to love something
very much

(verb)



I like to do lots of things, but I **adore**...

4

along



5 Make an 8 into a 10 to add.

8 + 4 is the same as 10 + 2



8 + 7 is the same as 10 + _____




6 Write the numeral.

___ hundreds
___ tens
___ ones

789

5 hundreds
16 ones

7 Check the features of the shape to find if it's a rhombus.



- quadrilateral
- parallel sides
- equal sides

Is it a rhombus? circle: YES or NO



- quadrilateral
- parallel sides
- equal sides

Is it a rhombus? circle: YES or NO

A rhombus is a parallelogram with 4 equal sides.

8 In the first basketball game, my team scored 45 points. In the second game, we scored 28 points.
How many more points did we score in the first game?



Name: _____

DAY
145

1 Write a sentence telling something you'll do tomorrow. **Circle** the adverbs. (Hint: tomorrow is an adverb!)

2 Finish the sentence with an adverb from the box. Then check if the adverb tells **how**, **where**, or **when**.

quickly inside last week nearby already slowly downstairs

We shopped _____ at the store.

how **where** **when**

Adverbs can describe verbs. They tell how, where, and when things happen.

3 Draw a line to connect each word to the correct meaning.

smear

quite

bold

to spread something
in a messy way

brave and
confident

very

4 **were**

w **e**

w

5 Solve.

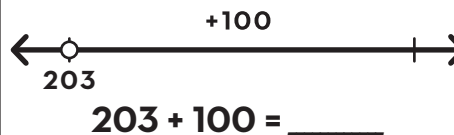
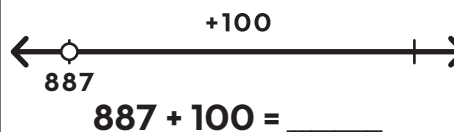
9 + **9** =

165 - **65** =

+ **11** = **20**

300 + = **600**

6 Draw arrows to add a hundred on the open number line.



7 Coretta read a total of 56 minutes today. She read 16 minutes before school. **How long did she read after school?**



The Chapstick is
_____ centimeters long.



Name: _____

DAY
146

1 What are three things you notice about the sentence below?

I rolled the dice twice and got an eleven and an eight.



2 Circle the correct spelling for each picture.



prise price prize



rice rize rise

3

thrice

three times

(adverb)

Take your off your muddy shoes because I've already mopped **thrice!**

How many times have I mopped?



4

it's

 t '

 ' s

5 Florencia and Geo have 13 marshmallows.
If they share the marshmallows equally, how many will each person get?



Each person will get _____ marshmallows.

6

141

_____ hundred _____ tens _____ one

_____ + _____ + _____

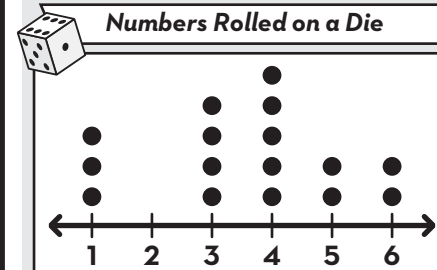
705

_____ hundreds _____ tens _____ ones

_____ + _____ + _____

7

Use the dot plot to answer the questions.



I rolled a 5 _____ times.

I rolled a _____ four times.

8

I had 4 carrots. I chopped each carrot into 11 slices.
How many carrot slices do I have?



I need 56 slices of carrot to make stew. How many more slices do I need?

Name: _____

DAY
147

1 Underline the 2 nouns in each sentence. Circle the **an** that comes before each noun.

I rolled twice and got an eleven and an eight.

Grab an ice cube and an orange slice.

Use **an** before nouns that start with a vowel. Use **a** before nouns that start with a consonant.

2 Sort the words by their spelling pattern.

card

circle

city

cone

hard c - cast

soft c - cent

3

thrice

three times

(adverb)



What does it mean if you've done something **thrice**?

4 Finish the sentence with the strongest synonym.

delightful nice good

It's a beautiful day. The weather is so _____!

Synonyms mean almost the same thing, but some have a stronger meaning.

5 Use 2 numbers in each group to make 16.

9 7 5

16 = ○ + ○

6 5 11

16 = ○ + ○

6 Write the number in different forms.


920 can be written as:

_____ hundreds _____ tens


or _____ tens

or _____ ones


7 Tell the time.



The hour hand is in the _____ o'clock space.



_____ minutes have passed since the hour started.



The time is: _____ : _____

8

The pet store had 72 mice. Some mice were sold, but there are still 45 mice left.

How many mice were sold?



Name: _____

DAY
148

1 Write a or an before each noun to complete the sentence.

_____ ice cream is nice on _____ day like today.

Can _____ ant lift _____ apple or just _____ grain of rice?

2 Write the word that matches each picture.

mice

dice

spice

rice



3

Our teacher told us **thrice** to...

thrice

three times
(adverb)



4

going

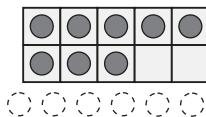
g o i n g

g o

5 Make an 8 into a 10 to add.

8 + 6 is the same as 10 + _____

8 + 6 = _____



8 + 5 = _____

10 + 3 = _____

8 + 3 = _____

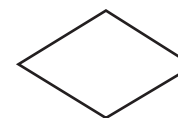
10 + 1 = _____

6 Write the numeral.

2 hundreds
0 tens
7 ones

800 +
40 +
9

7 Check the features of the shape to find if it's a rhombus.



- quadrilateral
- parallel sides
- equal sides

Is it a rhombus? circle: YES or NO



- quadrilateral
- parallel sides
- equal sides

Is it a rhombus? circle: YES or NO

A rhombus is a parallelogram with 4 equal sides.

8

On Friday, Celia spent 49 minutes on her device.
On Saturday, she spent 82 minutes on her device.
How much longer did she spend on Saturday?



Name: _____

DAY 149

1 Rewrite the sentence correctly.

add a egg and a onion to the fried rize

2 Circle & write the word that has the same vowel sound as the picture.



- print
- stink
- smile



- slice
- wire
- limp

3

thrice

three times
(adverb)



What's someplace you have visited at least **thrice**?

4

(re-)

"back" or "again"

If you like the color of your walls, should you **repaint** them? Why or why not?

5 Use the number line to solve the problems.




$43 - 11 = \underline{\quad}$



$66 - 23 = \underline{\quad}$


6 Draw lines to pair up pictures. Is it an even or odd amount?



14 is an _____ number.
even or odd

7 Each glass of lemonade has 3 ice cubes. There are 24 ice cubes in all. **How many glasses of lemonade are there?**

8 Find the total.



= _____

Cedric has 65¢. He gets 2 more dimes. **How much money does he have now?**



Name: _____

DAY
150

1 Write a sentence about an ice cream cone. Circle the **an** and **a**.

2 Finish the sentence with an adverb from the box. Then check if the adverb tells **how**, **where**, or **when**.

outside yesterday accidentally over there carelessly last year

_____ I slipped on the ice.

how **where** **when**

Adverbs can describe verbs. They tell how, where, and when things happen.

3 Draw a line to connect each word to the correct meaning.

quite

grime

adore

to love something
very much

very

dirt that covers
something

4 **very**

_____ **y**

v _____

5 Solve.

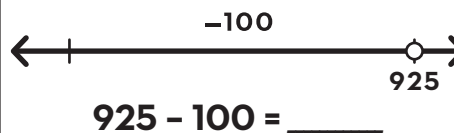
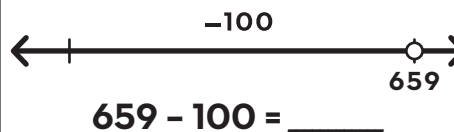
$$18 - \bigcirc = 4$$

$$\bigcirc + 100 = 190$$

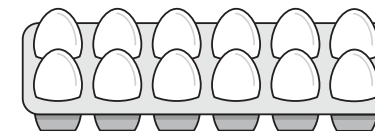
$$20 + 30 = \bigcirc$$

$$500 + 40 + 6 = \bigcirc$$

6 Draw arrows to subtract 100 on the open number line.



7 **ROW** →



There are _____ rows
of eggs.

There are _____ eggs in
each row.

There are _____ eggs
in all.

$$\bigcirc + \bigcirc = \bigcirc$$

8 The ice cream shop sold 20 scoops of vanilla ice cream.
They sold twice as many scoops of chocolate ice cream.
How many scoops of ice cream did they sell in all?



Name: _____

DAY 151

1 What are three things you notice about the sentence below?

You'd be crazy to miss seeing *The Lion King* on stage!



2 Circle the correct spelling for each picture.



aj age ayg



waje wag wage

3

rage

a very strong feeling of anger

(noun)

I was full of rage when I saw the broken window!

How did I feel?



4

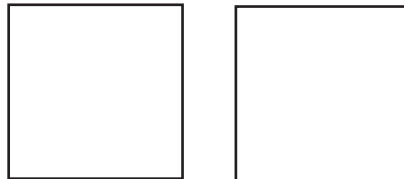
you've

o ' v

y '

5 Show 2 different ways to partition a square in halves.

2 halves



2 halves are equal to a whole.

6

844

_____ hundreds _____ tens _____ ones

_____ + _____ + _____

156

_____ hundred _____ tens _____ ones

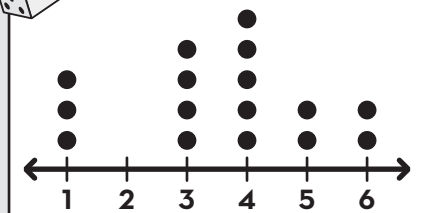
_____ + _____ + _____

7

Use the dot plot to answer the questions.



Numbers Rolled on a Die



I rolled a _____ the most times.

I rolled a _____ zero times.

8

Gina read from page 30 to page 50 in her book.
Then she read from page 60 to page 85.
How many pages did she read in all?



Name: _____

DAY 152

1 Circle the proper nouns in each sentence.

You'd be crazy to miss seeing *The Lion King* on stage in New York City!
I'm on page 81 in *Stuart Little* and page 104 in *Charlotte's Web*.

Capitalize all the words in most multi-word proper nouns.

2 Sort the words by their spelling pattern.

gum gym game gem

hard g - grant

soft g - giant

3

rage

a very strong feeling of anger

(noun)



What does **rage** have to do with dropping something heavy on your foot?

4 Use context clues to find the meaning of the underlined word.

She said I shouldn't do it and she was right.
She's such a sage!

Sage means _____.

- very smart person
- person who tells time

5 Write combinations of 17.

17		17	
2	15	11	6

_____ - 2 = 15 11 + _____ = 17

17 - _____ = 2 17 - 6 = _____

15 + _____ = 17 _____ - 6 = 11

6 Circle true statements. Cross out false statements.


179 can be expressed as:

179 ones


1 hundred 79 tens 9 ones

17 tens 9 ones


7 Tell the time.



The time is: _____



The time is: _____



The time is: _____

8



The zookeeper gave the giraffe 92 piles of leaves.
The giraffe ate 75 piles of leaves.
How many piles of leaves are left?

Name: _____

DAY
153

1 Finish each sentence. Remember to capitalize all the words in most proper nouns.

My teacher is named _____.

My school is called _____.



2 Write the word that matches each picture.

wage

stage

age

page



3

The teacher was shaking with **rage** when...

rage

a very strong
feeling of anger

(noun)



4

about

a b u

a t

5 Circle the 2 numbers that make 10. Then find the total.

$2 + 6 + 8 = \underline{\quad}$

$10 + 6$

$5 + 5 + 7 = \underline{\quad}$

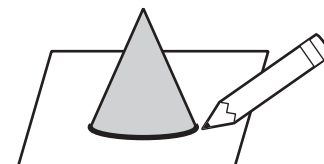
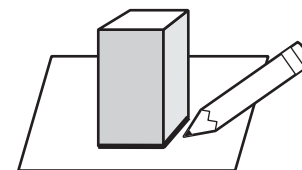
6 Write the numeral.

___ hundreds
___ tens
___ ones

943

75 tens
8 ones

7 Circle the shape you can get by tracing each solid shape.



8

The giant ate 76 potatoes and 58 carrots for lunch.

How many vegetables did eat in all?





Name: _____

DAY
154

1 Rewrite the sentence correctly. **he gets a better wage at pat's pizzeria**

2 Circle & write the word that has the same vowel sound as the picture.

	page	_____
	whale	_____
	brag	_____
	play	_____
	fast	_____
	have	_____


3

What might make you feel **rage**?

rage

a very strong feeling of anger

(noun)



4 **(-less)**

"without"

If something is **painless**, will it hurt?

5 Subtract.

$40 - 10 - 5 = \underline{\quad}$

$40 - 15 = \underline{\quad}$

$57 - 20 - 6 = \underline{\quad}$

$57 - 26 = \underline{\quad}$

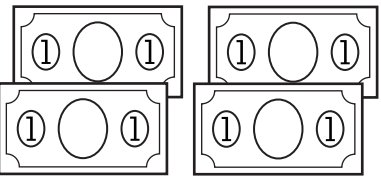
6 Use >, < or = to compare the numbers

288	○	98
321	○	213
917	○	916

7 5 mice can be kept in one cage.

How many cages do I need for 40 mice?

8 Find the total.




= _____

Gage had 35¢.

He got 2 quarters from his dad.

How much money does he have now?



Name: _____

DAY
155

1 Write a sentence telling about a restaurant you like. Circle the proper nouns.

2 Write **a** or **an** before each noun to finish the sentence.

We saw _____ sprout in the garden.

It will bloom into _____ iris flower.

Will it need _____ umbrella if it rains?

Use **an** before nouns that start with a vowel.

3 Draw a line to connect each word to the correct meaning.

croon

thrice

adore

to use a soft, low voice

to love something very much

three times

4 won't

_____ ' t

o _____

5 Solve.

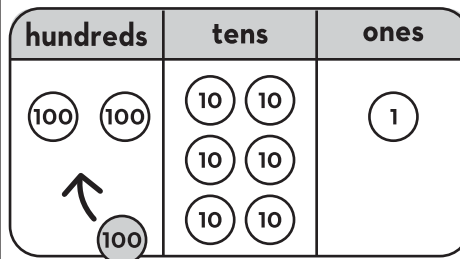
$63 - 20 = \bigcirc$

$8 + \bigcirc = 14$

$200 + 92 = \bigcirc$

$600 - 300 = \bigcirc$

6 Write the number shown on the chart.



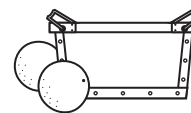
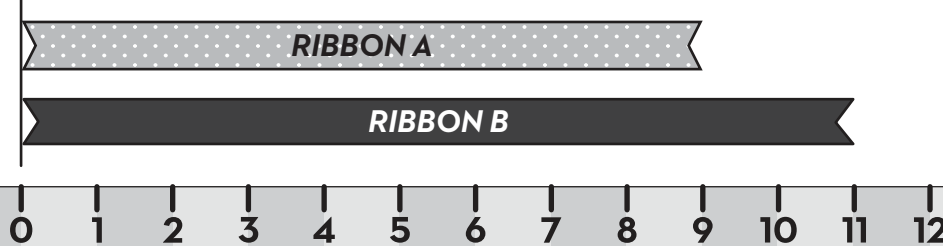
7 10 oranges fit in one box.
10 boxes of oranges fit on a shelf.
How many boxes are needed for 129 oranges?

How many shelves are needed for the boxes of oranges?

8 Measure the ribbons.

RIBBON A is _____ centimeters long.

RIBBON B is _____ centimeters long.



Name: _____

DAY 156

1 What are three things you notice about the sentence below?

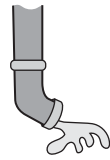
If you keep shouting about the bug, I'm not going to catch it!



2 Circle the correct spelling for each picture.



sprote shout sprout



spout spot spowte

3

pout

to push your lip out
to show you're
angry or annoyed

(verb)

He **pouted** when his dad
said it was time to go.

What is he doing?



4

let's

 e t '

 ' s

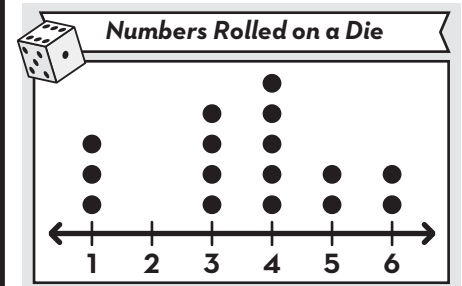
5 Lincoln is sharing a bowl of popcorn equally with 3 people. MJ is sharing a bowl of popcorn equally with 4 people.
Does Lincoln or MJ get more popcorn?



6 Circle numbers that have an 8 in the ones place.

458 892 328
968 181
835 486 708

7 Use the dot plot to answer the questions.



I rolled _____ and _____
the same number of times.

I rolled a _____ three times.

8

In the park, the scouts planted 13 daisies, 12 marigolds, 12 daisies, and 21 pansies.

How many flowers did they plant in all?



Name: _____

**DAY
157**

1 **Circle** the 2 verbs in each sentence with **-ing** endings.

If you keep shouting about the bug, I'm not going to catch it!
We went fishing for trout, but ended up catching an old boot.

Adding letters to the ends of words can change their meanings.

2 Sort the words by their spelling pattern.

snout

cloud

brown

clown

ow - cow

ou - couch

3

pout

to push your lip out
to show you're
angry or annoyed

(verb)



What does **pout** have to do with
losing a game?

4 Finish the sentence with the
strongest synonym.

talk shout speak

He was so angry all he
could do was _____.

Synonyms mean almost the same thing,
but some have a stronger meaning.

5 Use 2 numbers in each group
to make 17.

8 7 9

17 = ○ + ○

7 6 10

17 = ○ + ○

6 **Circle** true statements.
Cross out false statements.


253 can be expressed as:

2 tens 5 ones 3 hundreds


53 ones 2 hundreds

25 tens 3 ones


7 Tell the time.



The time is:
: _____

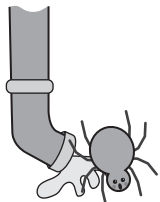


The time is:
: _____



The time is:
: _____

8 There were a lot of spiders in the waterspout. The rain came down and washed 15 spiders out.
There are still 108 spiders left in the waterpout.
How many spiders were there to begin with?



Name: _____

DAY
158

1 Complete each sentence by adding **-ing** to a word from the WORD BANK.

WORD BANK	
wait	play
sing	go
try	read

I'm _____ without her.

They're still _____.

2 Write the word that matches each picture.

- shout spout scout sprout



3

She **pouted** when she heard...

pout

to push your lip out
to show you're
angry or annoyed

(verb)



4

should

		o	u		
	h				d

5 Circle the 2 numbers that make 10. Then find the total.

$$1 + 5 + 9 = \underline{\quad}$$

$$4 + 7 + 3 = \underline{\quad}$$

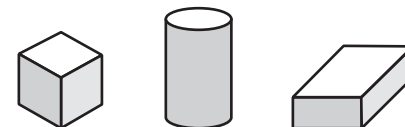
6 Write the numeral.

6 tens
1 one
9 hundreds

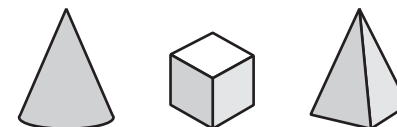
7 +
400 +
20

7 Circle the solid shape with the correct face.

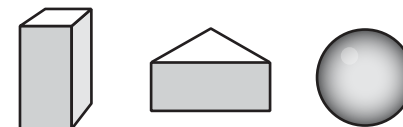
Which shape has a circle face?



Which shape has a triangle face?



Which shape has a square face?



8

There were 124 cloudy days in Sprout City last year.

Sunville only had 86 cloudy days.

How many **fewer** cloudy days did Sunville have than Sprout City?



Name: _____

DAY
159

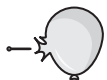
1 Rewrite the sentence correctly.

pout ing isnt helpful right now

2 Circle & write the word that has the same vowel sound as the picture.



hole
grout
float



clog
wore
love

3

What might make you **pout**?

pout

to push your lip out
to show you're
angry or annoyed

(verb)



4

(pre-)

"before"

If your dinner is **precooked**,
do you need to cook it?

5 Add.

$20 + 10 + 8 = \underline{\quad}$

$20 + 18 = \underline{\quad}$

$32 + 50 + 4 = \underline{\quad}$

$32 + 54 = \underline{\quad}$

6 Draw lines to pair up pictures.
Is it an even or odd amount?



15 is an _____ number.
even or odd


7 Each rainbow trout has 7 fins.
There are 3 trout.
How many fins are there?

8 Find the total.



= _____

Sakari had 5 dimes and a nickel!
She spent 20¢ on a pencil.
How much money does she have now?



Name: _____

DAY
160

1 Write a sentence about shouting. Circle the verbs with **-ing** at the end.

2 Write a proper noun to answer each question. Remember capitals!

A book title: _____

A country: _____

Your street: _____

Capitalize all the words in most multi-word proper nouns.

3 Draw a line to connect each word to the correct meaning.

rage

coil

thrice

to wind around
in circles

three times

a very strong feeling
of anger

4 great

 r t

 g t

5 Solve.

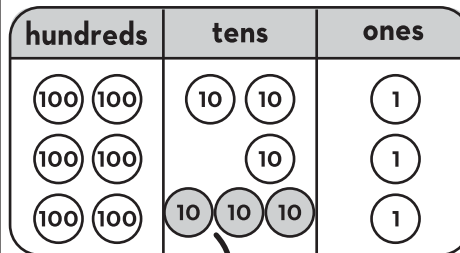
20 - ○ = 9

5 + 8 = ○

70 + 20 = ○

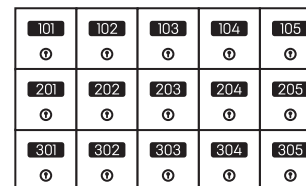
30 + 600 + 10 = ○

6 Write the number shown on the chart.



30 less than 663 is _____.

7 ROW →



There are _____ rows
of mailboxes

There are _____ mailboxes
in each row.

There are _____ mailboxes
in all.

○ + ○ + ○ = ○

8 Each table has a box of crayons. In the box are 2 yellows, 2 blues, 1 green, 3 reds, and 2 blacks. There are 10 tables.

How many red crayons are there in all?

How many crayons are there altogether?



Name: _____

DAY
161

1 What are three things you notice about the sentence below?

We saw the lizards hiding and crawling on the lawn.



2 Circle the correct spelling for each picture.



jaw jah jawe



pow paw pah

3

raw
not cooked
(adjective)

Can you put out the tray of raw carrots and dip?

What are the carrots like?



4

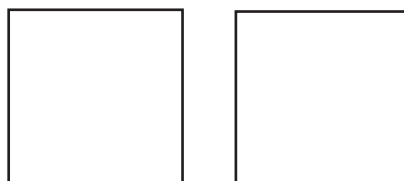
every

e v

r y

5 Show 2 different ways to partition a square in thirds.

3 thirds



3 thirds are equal to a whole.

6

289

_____ hundreds _____ tens _____ ones

_____ + _____ + _____

74

_____ hundreds _____ tens _____ ones

_____ + _____ + _____

7 Write 2 things you notice about this data table.


Number of Students Who Ride Each Bus



BUS 1	25
BUS 2	22
BUS 3	19
BUS 4	31

8

I did a jigsaw puzzle with 125 pieces and a jigsaw puzzle with 110 pieces.
How many puzzle pieces were there in all?



Name: _____

DAY
162

1 Circle the 2 verbs in each sentence with **-ing** endings.

We saw the lizards hiding and crawling on the lawn.
You better be joking about breaking the law!

For words that end in e, drop the e before adding -ing.

2 Sort the words by their spelling pattern.

launch

dawn

hawk

pause

-au

-aw

3

raw

not cooked

(adjective)



What does **raw** have to do with meat?

4 Use context clues to find the meaning of the underlined word.

The dog gnawed on the bone.

Gnawed means _____.

- barked
- chewed

5 Write combinations of 18.

18	
9	9

18	
3	15

18 - _____ = 9 _____ + 15 = 18

9 + _____ = 18 18 - _____ = 3

_____ - 9 = 9 15 + 3 = _____

6 Circle true statements. Cross out false statements.


965 can be expressed as:

965 hundreds


9 hundreds 6 tens 5 ones

96 tens 5 ones


7 Tell the time.



The time is: _____



The time is: _____



The time is: _____

8

There were 199 paper straws. Some straws were used
64 straws were left.

How many straws were used?



Name: _____

DAY
163

1 Add **-ing** to the underlined verbs to complete each sentence. Don't forget to drop the e!

I like to hike and I get to go _____ today!

I'll wave goodbye to you, but I'd rather be _____ hello.


2 Write the word that matches each picture.

draw

straw

slaw

claw



3

The chef served **raw**...

raw

not cooked

(adjective)



4

saw



5 Make the problems easier by making 10 or using doubles.

$$4 + 3 + 3 = \underline{\quad}$$

$$6 + 4 + 6 = \underline{\quad}$$

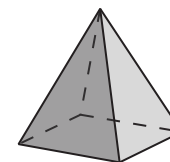
6 Write the numeral.

___ hundreds
___ tens
___ ones

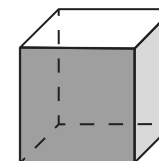
655

97 tens
1 one

7 Tell how many faces each solid shape has.



A pyramid has _____ faces.



A cube has _____ faces.

A **face** is a flat part of a solid (3-D) shape.

8

On my camping trip, I saw 175 birds and 23 fish.

How many animals did I see in all?





Name: _____

DAY
164

1 Rewrite the sentence correctly. **Jens baby is smileing and crawling**

2 Circle & write the word that has the same vowel sound as the picture.

	tray	_____
	next	_____
	yawn	_____

	say	_____
	sad	_____
	law	_____

3

What foods do you like to eat **raw**?

raw

not cooked

(adjective)



4 **(-ly)**

"in a certain way"

If you're moving **quickly**, are you going fast?

5 Subtract.

64 - 30 - 1 = _____

64 - 31 = _____

77 - 40 - 8 = _____


77 - 48 = _____

6 Use >, < or = to compare the numbers




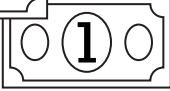

863	○	863
994	○	949
396	○	693

7 Each crab has 2 claws. There were 22 claws in all.

How many crabs were there?



8 Find the total.



= _____

I have 38¢.
Marie has 82¢.

How much more money does Marie have?

Name: _____

DAY
165

1 Write a sentence about making your bed. Circle the verbs with **-ing**.

2 Add **-ing** to the underlined verbs.

I yawn. I am _____.

We draw. We are _____.

Birds squawk. They're _____.

Adding letters to the ends of words can change their meanings.

3 Draw a line to connect each word to the correct meaning.

glare

rage

pout

a very strong feeling
of anger

to push your lip out in
anger or annoyance

to look at someone in
an angry way

4 **heard**

_____ d

h _____ r _____

5 Solve.

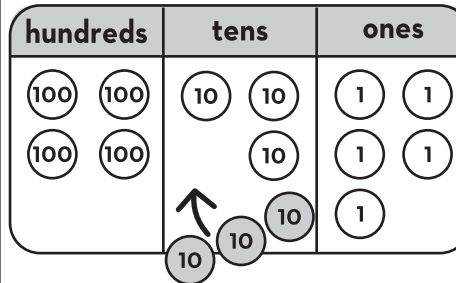
21 - ○ = 11

34 + 500 = ○

14 + 5 = ○

30 - ○ = 9

6 Write the number shown on the chart.



7 I made a lot of drawings. I gave my grandma 20 drawings and gave my teacher 15 drawings. I still have 45 drawings left. **How many drawings did I make in all?**

8 Measure the ribbons.

RIBBON A is _____ cm long.

RIBBON B is _____ cm shorter than RIBBON A.



Name: _____

DAY 166

1 What are three things you notice about the sentence below?

You can't go swimming in a bathtub or skipping in a shower!



2 Circle the correct spelling for each picture.



brow bow bowe



vow voaw vowe

3


chow

to eat a lot of food quickly

(verb)

We all **chowed** down on the pizza.

What did we do?



4

among

m o

n g

5 Catalina has 2 cans of paint. She uses half a can to paint her playhouse.
How many cans of paint does Catalina have left?



6 Circle numbers that have a 6 in the ones place.

161 586 362
60 946
26 679 786

7 Use the data table to answer the questions.

Number of Students Who Ride Each Bus



BUS 1	25
BUS 2	22
BUS 3	19
BUS 4	31

BUS _____ has the most students.

22 students ride BUS _____.

8

The farmer needs to milk all her cows. So far, she has milked 118 cows. In all, the farmer has 238 cows.

How many more cows still need to be milked?



Name: _____

DAY
167

1 Circle the 2 verbs in each sentence with **-ing** endings.

You can't go swimming in a bathtub or skipping in a shower!
I'm stirring the powder with water, but it's not mixing.

Adding letters to the ends of words can change their meanings.

2 Sort the words by their spelling pattern.

frown found mouth growl

ow - cow

ou - couch

3

chow
to eat a lot of food quickly
(verb)



What does **chow down** have to do with lunch?

4 Finish the sentence with the strongest synonym.

said promised vowed

He _____ to
always be my friend.

Synonyms mean almost the same thing, but some have a stronger meaning.

5 Use 2 numbers in each group to make 18.

11 7 9

18 = +

9 8 10

18 = +

6 Circle true statements.
Cross out false statements.


803 can be expressed as:

80 tens 3 ones


803 ones

80 ones 3 tens


7 Tell the time.



The time is:
: _____



The time is:
: _____




The time is:
: _____

8

The queen got some new gowns. She used to have 231 gowns,
but now she has 253 gowns.

How many new gowns did the queen get?



Name: _____

DAY
168

1 Add **-ing** to the underlined verbs to complete each sentence. Don't forget to double the consonant!

We clap for all the singers, but we were _____ a lot for him.

Her crown will slip if it's too big and we don't want it _____!


2 Write the word that matches each picture.

town

brow

cow

plow



3

The kids **chowed** down on...

chow

to eat a lot of food quickly

(verb)



4

think

t	h			
---	---	--	--	--

		i	n	
--	--	---	---	--

--	--	--	--	--

5 Make the problems easier by making 10 or using doubles.

$$7 + 2 + 3 + 5 = \underline{\quad}$$

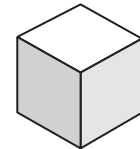
$$2 + 2 + 8 + 8 = \underline{\quad}$$

6 Write the numeral.

2 tens
0 hundreds
8 ones

600 +
4 +
70

7



Bert saw this picture and said cubes have 3 faces. Is Bert right or wrong? Explain how you know.

8

265 people live in my town. 51 people live in apartments.
The rest of the people live in houses.
How many people live in houses?



Name: _____

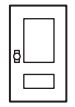
DAY
169

1 Rewrite the sentence correctly. **is he grabing an towel**

2 Circle & write the word that has the same vowel sound as the picture.



- cow
- love
- goat




- plow
- wore
- from

3

chow

to eat a lot of food quickly

(verb)



What do you like to **chow** down on if you're very hungry?

4 **(mid-)**

"near the middle of"

If we are **midway** to the zoo, are we at the zoo yet?

5 Add.

$26 + 10 + 7 = \underline{\quad}$

$26 + 17 = \underline{\quad}$

$59 + 40 + 2 = \underline{\quad}$

$59 + 42 = \underline{\quad}$

6 Draw lines to pair up pictures. Is it an even or odd amount?


● ● ● ● ● ● ● ●

● ● ● ● ● ● ● ●


18 is an _____ number.
even or odd

7 Each hotel room needs 2 towels. I have 44 towels. **Do I have enough towels for 25 hotel rooms?**

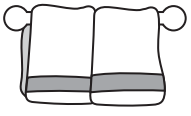
8 Find the total.



$\text{ } = \underline{\quad}$



Magnus wants a notebook that costs \$1.20. He has 5 quarters. **Does he have enough to buy the notebook?**



Name: _____

DAY
170

1 Write a sentence about shopping. Circle the verbs with **-ing** at the end.

2 Add **-ing** to the underlined verbs. Don't forget to drop the e!

I ride. I am _____.

We bake. We are _____.

They vote. They're _____.

For words that end in e, drop the e before adding -ing.

3 Draw a line to connect each word to the correct meaning.

raw

pout

smear

to push your lip out in anger or annoyance

not cooked

to spread something in a messy way

4 these

	h		s	e
--	---	--	---	---

t	h			
---	---	--	--	--

--	--	--	--	--

5 Solve.

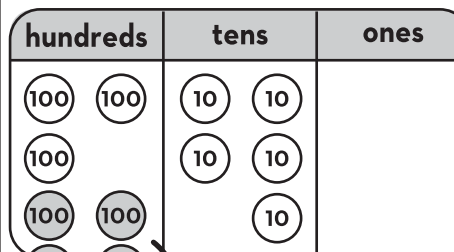
$$\textcircled{30} - \textcircled{4} = \textcircled{\quad}$$

$$\textcircled{800} + \textcircled{\quad} = \textcircled{872}$$

$$\textcircled{72} - \textcircled{12} = \textcircled{\quad}$$

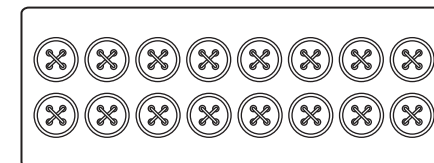
$$\textcircled{8} + \textcircled{8} + \textcircled{2} = \textcircled{\quad}$$

6 Write the number shown on the chart.



400 less than 760 is _____.

7 ROW →



There are _____ rows of buttons

There are _____ buttons in each row.

There are _____ buttons in all.

$$\textcircled{\quad} + \textcircled{\quad} = \textcircled{\quad}$$


8

At the flower shop, 10 flowers fit in a vase. 10 vases fit on a shelf.

There are 319 flowers.

How many vases are needed for the flowers?

How many shelves are needed for the vases?



Name: _____

DAY
171

1 What are three things you notice about the sentence below?

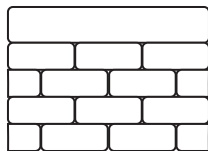
Does Mr. Waters sell baseballs at the mall on Wall St.?



2 Circle the correct spelling for each picture.



toll tall tawl



wahl woll wall

3

squall

a sudden, windy storm that brings rain or snow

(noun)



The **squall** ruined our picnic.

What ruined the picnic?

4

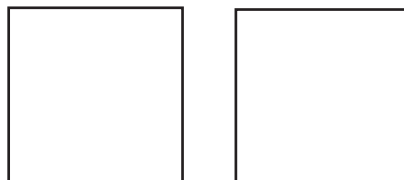
caught

a u t

c t

5 Show 2 different ways to partition a square in fourths.

4 fourths



4 fourths are equal to a whole.

6

728

_____ hundreds _____ tens _____ ones

_____ + _____ + _____

39

_____ hundreds _____ tens _____ ones

_____ + _____ + _____

7 Write 2 things you notice about this data table.

Number of Students Who Ride Each Bus



BUS 1	25
BUS 2	22
BUS 3	19
BUS 4	31

The fewest students ride

BUS _____.

_____ more students ride

BUS 4 than BUS 2.

8

219 kids signed up to play basketball.

55 more kids came to sign up.

How many kids signed up for basketball?



Name: _____

DAY
172

1 Circle the 2 abbreviations in each sentence.

Does Mr. Waters sell baseballs at the mall on Wall St.?
On Tues. night, Sen. Jones will speak at a townhall meeting.

Capitalize abbreviations of names and titles.

2 Sort the words by their spelling pattern.

want

wash

salt

call

-al

-wa

3

squall

a sudden, windy storm that brings rain or snow

(noun)



What does **squall** have to do with an umbrella?

4 Use context clues to find the meaning of the underlined word.

I was appalled by the rude things they said!

Appalled means _____.

- shocked and disgusted
- hungry and grumpy

5 Write combinations of 19.

19	
4	15

19	
2	17

_____ - 4 = 15 17 + _____ = 19

19 - _____ = 4 19 - 2 = _____

15 + _____ = 19 _____ - 17 = 2

6 Circle true statements. Cross out false statements.


749 can be expressed as:

74 tens 9 ones

7 ones 4 hundreds 9 tens


9 ones 7 hundreds 4 tens

7 Tell the time.




The time is:

_____ : _____



The time is:

_____ : _____



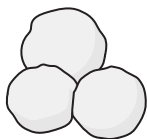
The time is:

_____ : _____

8

The kids rolled 356 snowballs. They threw some of the snowballs.
They have 32 snowballs left.

How many snowballs did they throw?



Name: _____

DAY
173

1 Finish the sentences with names of people you know. Use the titles: Mr., Ms., Mrs., or Miss.

My neighbor is _____.

My teacher is _____.


2 Write the word that matches each picture.

ball

call

small

fall



3

Because of the **squall**, we...

squall

a sudden, windy
storm that brings
rain or snow

(noun)



4

people

	e	o		l	
--	---	---	--	---	--

p	e		p		
---	---	--	---	--	--

--	--	--	--	--	--

5 Make the problems easier by making 10 or using doubles.

$$7 + 5 + 5 + 3 = \underline{\quad}$$

$$6 + 1 + 3 + 4 = \underline{\quad}$$

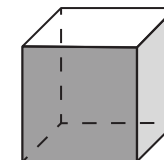
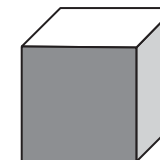
6 Write the numeral.

__ hundreds	909
__ tens	
__ ones	

286 ones

7 Tell everything you know about the shape.

cube



8

The highest waterfall is Angel Falls in Venezuela. It is 979 meters high.

In New Zealand, Browne Falls is 836 meters high.

How much higher is Angel Falls than Browne Falls?


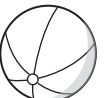


Name: _____

DAY
174

1 Rewrite the sentence correctly. **did dr smith say i might grow taller**

2 Circle & write the word that has the same vowel sound as the picture.


	fall	_____
	said	_____
	gray	_____
	hawk	_____
	ramp	_____
	bake	_____

3

squall

a sudden, windy storm that brings rain or snow

(noun)



What would you do if you were caught in a **squall**?

4 **(-er)**

“a person who does something”

What does a **painter** do?

5 Subtract.

93 - 30 - 7 = _____

93 - 37 = _____

62 - 40 - 4 = _____

62 - 44 = _____


6 Use >, < or = to compare the numbers

892	○	829
433	○	433
516	○	561

7 In football, a touchdown is worth 6 points. My team made 4 touchdowns.

How many points did we get?


8 Find the total.



= _____

Malin had 2 quarters and 2 dimes.
She spent 28¢ on a sticker.

How much more money does Malin have left?



Name: _____

DAY
175

1 Write a sentence about what you do on Saturday. Abbreviate Saturday as **Sat.** (Circle) the abbreviation.

2 Add **-ing** to the verbs. Don't forget to double the consonant!

I grin. I am _____.

We stop. We are _____.

Bees hum. They're _____.

Adding letters to the ends of words can change their meanings.

3 Draw a line to connect each word to the correct meaning.

raw

chow

quite

very

not cooked

to eat a lot of food quickly

4 earth

e a r

t h

5 Solve.

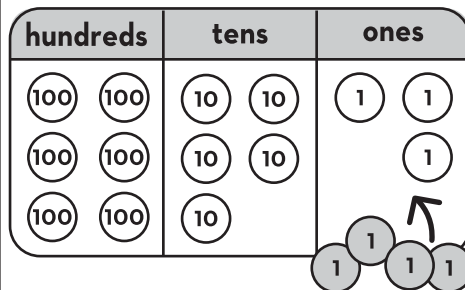
5 + 4 =

70 + = 100

50 - 6 =

8 + 16 =

6 Write the number shown on the chart.



4 more than 653 is _____.

7 A signed copy of the book Charlotte's Web is worth \$795. A signed copy of Harry Potter is worth \$175.

How much more is Charlotte's Web worth?

8 Measure the ribbons.

RIBBON A is _____ cm long.

RIBBON B is _____ cm longer than RIBBON A.



Name: _____

DAY
177

1 Underline the words that are spoken in each sentence.

“At the Clark Aquarium, we saw hundreds of sharks,” I said.
Mark explained, “We often park our car here when we visit.”

Put quotation marks around what is being said in a sentence.

2 Sort the words by their spelling pattern.

storm

spark

north

card

-ar

-or

3

lark

something you do
for the fun of it

(noun)



What does a **lark** have to do with climbing a tree?

4 Finish the sentence with the strongest synonym.

stark

empty

plain

There was very little in the
room. It was _____.

*Synonyms mean almost the same thing,
but some have a stronger meaning.*

5 Use 2 numbers in each group to make 19.

11 12 7

$$19 = \bigcirc + \bigcirc$$

9 8 10

$$19 = \bigcirc + \bigcirc$$

6 Circle true statements.

Cross out false statements.


253 can be expressed as:

20 tens 53 ones

2 ones 5 tens 3 hundreds


253 ones

7 Tell the time.




The time is:

:



The time is:

:



The time is:

:

8

There were 360 markers in the art room. Some markers dried out.

Now there are 275 markers in the art room.

How many markers dried out?



Name: _____

DAY
178

1 Add quotation marks “ ” before and after the words that are spoken in each sentence.

Temo shouted, Castle Park doesn't even have a castle!
It's too dark to see any of the street signs, I said.

2 Write the word that matches each picture.

mark

lark

bark

park



3

lark

something you do
for the fun of it

(noun)



She thought it would be a lark if we...

4

want



5 Make the problems easier by
making 10 or using doubles.

$$3 + 4 + 6 + 7 = \underline{\quad}$$

$$1 + 9 + 1 + 9 = \underline{\quad}$$

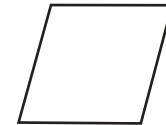
6 Write the numeral.

9 tens
4 ones
5 hundreds

800 +
7 +
30

7 Tell everything you know
about the shape.

rhombus



8 The whale shark is the largest shark and can grow to be 540 inches long.
The dwarf lantern shark only grows to 8 inches long.
How much shorter is the dwarf lantern shark than the whale shark?



Name: _____

DAY
180

1 Write something a dentist might say. Circle the quotation marks.

2 Write the correct abbreviation from the box next to each word.

Mr. Capt. Aug. St.

Street _____ Captain _____

Mister _____ August _____

Capitalize abbreviations of names and titles.

3 Draw a line to connect each word to the correct meaning.

adore

squall

chow

to love something
very much

to eat a lot of
food quickly

a sudden, windy storm
that brings rain or snow

4 he'd

 e '

 ' d

5 Solve.

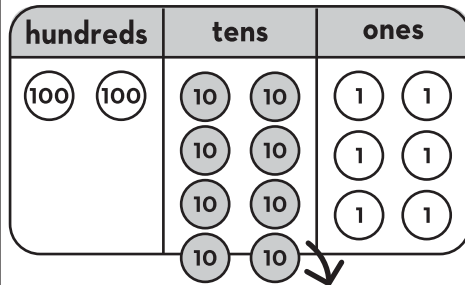
50 - 5 =

40 + = 100

- 10 = 12


10 + 300 + 60 =

6 Write the number shown on the chart.



80 less than 286 is _____.

7 ROW →



There are _____ rows of chocolate squares.

There are _____ chocolate squares in each row.

There are _____ chocolate squares in all.

+ + =

8 A brown parka costs \$119.
A blue parka costs \$26 more than a brown one.
How much does a blue parka cost?





>> Terms of Use <<

The original purchaser of this document is hereby granted permission to reproduce this document specifically for teaching purposes in a single classroom. If you are NOT the original purchaser, please download the item from my store on Teachers Pay Teachers before making any copies. Redistributing, editing, selling, or posting this item or any part thereof on the Internet is strictly prohibited without first gaining permission from the author. Violations are subject to the penalties of the Digital Millennium Copyright Act.

Please contact us if you wish to be granted special permission or if you have a question about the usage of this product.

>> Which Means? <<

You **CANNOT** copy this resource for others...
but you **CAN** tell them all about it!

You **CANNOT** put a copy of this resource online...
but you **CAN** link to the item in our store!

You **CANNOT** change or sell this resource...because, well, c'mon! It took a long time and a lot of effort for us to make it!

THANK YOU

FOR YOUR DOWNLOAD!



SHOP

Hello there! We are a set of sisters who are the brains behind the 'Second Story Window' brand. We are both former 2nd grade teachers and current preschool teachers with a combined 17 years experience in the classroom. We love to make life just a little easier for teachers by designing curriculum that is both rigorous and easy-to-use!

Emily & Heidi

TRANSFORM YOUR

Word Work INTO Word Play

- A COMPREHENSIVE PHONICS CURRICULUM -

Ready to take your word work to the next level?

CLICK THE BUTTON BELOW TO TRY OUT OUR PHONICS CURRICULUM... COMPLETELY FREE!

I WANT WORD PLAY!

