

Name: \_\_\_\_\_

# DAY 136


1 What are three things you notice about the sentence below?

I secretly ate a bite of Mel's cake, but I barely touched it!

Answers will vary, but may include ideas such as: it starts with a capital, it's an exclamation, possessive noun, past tense verbs, adverbs, etc.



2 Circle the correct spelling for each picture.



invit **invite** invight



wight wite **white**

## invite

## white

3

## quite

very

(adverb)

It was springtime, but it felt quite hot outside.

How did it feel outside?

**It feels very hot.**



4

## I've

I ' v e

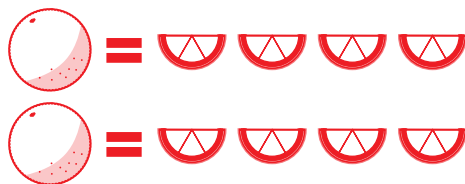
I ' v e

I ' v e

5 I need a fourth of an orange to make a snack.

How many snacks can I make with 2 whole oranges?

**8 snacks**



6

## 970

9 hundreds 7 tens 0 ones  
**900 + 70 + 0**

## 43

0 hundreds 4 tens 3 ones  
**0 + 40 + 3**

7 Use the pictograph to answer the questions.

Slices of Watermelon Eaten

Alexis	
David	
Moira	

KEY:  
 = 1 slice

**David** ate 2 fewer slices than Alexis.

Together, Alexis and Moira ate **9** slices of watermelon.

8

Mrs. Clive put 24 pink flamingos in her yard. Then she put out 18 more.

How many flamingos are in her yard now?

**42 flamingos**  $24 + 18 = 42$

The wind blew down 10. How many flamingos are left?

**32 flamingos**  $42 - 10 = 32$



Name: \_\_\_\_\_

DAY  
**137**

1 Underline the 2 verbs in each sentence. Circle the adverbs that describe the verbs.

I secretly ate a bite of Mel's cake, but I barely touched it!  
I invited him yesterday, but he politely said no.

Adverbs can describe verbs. They tell how, where, and when things happen.

2 Sort the words by their spelling pattern.

wire

drier

fire

pliers

**-ier**

**drier**  
**pliers**

**-ire**

**wire**  
**fire**

3

**quite**

very  
(adverb)



What does it mean to do something **quite** well?

**ANSWERS WILL VARY**

**[It means you do it very well.]**

4 Finish the sentence with the strongest synonym.

**gobble**   **chew**   **bite**

I'm so hungry I'm going to

**gobble**

every crumb of bread!

*Synonyms mean almost the same thing, but some have a stronger meaning.*

5 Use 2 numbers in each group to make 15.

**8**   **7**   **6**

$$15 = 8 + 7$$

**9**   **11**   **4**

$$15 = 11 + 4$$

6 Write the number in different forms.


670 can be written as:

**6** hundreds **7** tens


or **67** tens

or **670** ones

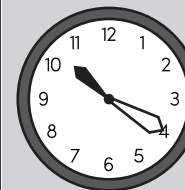
7 Tell the time.



The hour hand is in the **10** o'clock space.



**20** minutes have passed since the hour started.



The time is: **10:20**

8

52 people are flying kites in the park. 23 of the people leave.

How many people are still flying kites?

**29** people are still flying kites  
**52 - 23 = 29**



Name: \_\_\_\_\_

# DAY 138

1 Add an adverb to complete each sentence. Underline the verb each adverb describes.

### ADVERBS that tell HOW

quickly	joyfully	easily
quietly	dimly	boldly
slowly	closely	wildly

The kite blew \_\_\_\_\_ in the breeze.

**ANSWERS WILL VARY**

That white marker draws \_\_\_\_\_.

2 Write the word that matches each picture.

white

spite

bite

write



**bite**

**write**

3

I live **quite** near...

**ANSWERS WILL VARY**

**quite**

very  
(adverb)



4

**their**

t h e i r

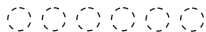
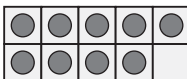
t h e i r

t h e i r

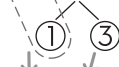
5 Make a 9 into a 10 to add.

9 + 6 is the same as 10 + 5

9 + 6 = 15

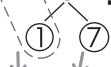


9 + 4 = 13



10 + 3 = 13

9 + 8 = 17



10 + 7 = 17

6 Write the numeral.

9 hundreds  
1 ten  
3 ones

**913**

7 hundreds  
6 tens  
2 ones

**762**

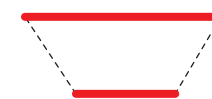
7 Trace the parallel sides.  
Circle the shape's name.



trapezoid  
**parallelogram**



trapezoid  
parallelogram



trapezoid  
parallelogram



trapezoid  
**parallelogram**

Trapezoid = 1 pair of parallel sides  
Parallelogram = 2 pairs of parallel sides

8 Tyshawn invited 45 people to the school play. Irelee invited 26 people.  
How many more people did Tyshawn invite?

**19 more people**  
**45 - 26 = 19**



Name: \_\_\_\_\_

DAY  
**139**

1 Rewrite the sentence correctly.

quickly write her a letter and ill mail it today

**Quickly write her a letter and  
I'll mail it today.**

2 Circle & write the word that has the same vowel sound as the picture.



think  
**child**  
print

**child**



bird  
their  
**crier**

**crier**

3

**quite**

very  
(adverb)



What might make you feel **quite** surprised?

**ANSWERS WILL VARY**

4

**(-un)**

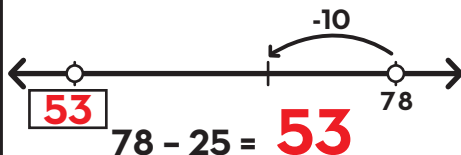
"not" or "to remove"

Are you **unhappy** if you get a present? Why or why not?

**No, people are usually happy with presents. Unhappy means not happy.**

5

Make jumps of tens and ones to subtract 25.



6

Draw lines to pair up pictures. Is it an even or odd amount?



10 is an **even** number.  
even or odd

7

I can eat a cracker in 4 bites. I ate 4 crackers. How many bites did I take?

**16 bites**  
 $4 + 4 + 4 + 4 = 16$

8

The car costs 1 dollar. I have 100 pennies. Do I have enough to pay for the car?

**yes**

How do you know?



**100 pennies is equal to 1 dollar**



Name: \_\_\_\_\_

DAY  
**140**

1 Write a sentence telling something you do happily. Circle the adverbs.

**ANSWERS WILL VARY**

2 Form a contraction with the words.

we + had = we'd

I + would = I'd

they + are = they're

A contraction combines 2 words with an apostrophe.

3 Draw a line to connect each word to the correct meaning.

ban

~~smear~~

~~glare~~

to say people can't do something

to look at someone in an angry way

to spread something in a messy way

4 **always**

a l w a y s

a l w a y s

a l w a y s

5 Solve.

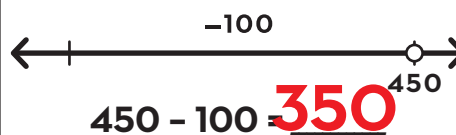
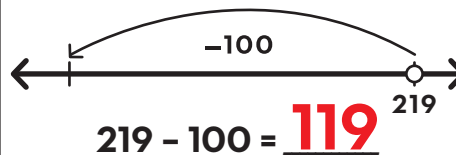
$$500 - 300 = 200$$

$$700 + 80 = 780$$


$$8 + 12 = 20$$

$$50 + 50 + 50 = 150$$

6 Draw arrows to add a hundred on the open number line.



7 Partition 12 starfish by circling groups of 6.



There are 2 groups of 6 starfish.

8 There are 24 roses in the vase. 16 are red and the rest of the roses are white.  
How many of the roses are white?

**8 roses are white**

$$16 + 8 = 24$$



Name: \_\_\_\_\_

DAY  
**141**

1 What are three things you notice about the sentence below?

He snores loudly, but I just ignore him.

Answers will vary, but may include ideas such as: starts with a capital, it's a telling sentence, pronouns, verbs, adverbs, etc.



2 Circle the correct spelling for each picture.



chore choar chor boar bor bore

**chore**

**bore**

3

**adore**

to love something very much  
(verb)

The baby is so cute and I **adore** his little laugh!

How do I feel about the baby's laugh?

**I love it very much.**



4

**wore**

w o r e

w o r e

w o r e

5 Label each partitioned shape halves, thirds, or quarters.



**thirds**



**halves**



**fourths**

6

**18**

0 hundreds 1 ten 8 ones  
0 + 1 + 8

**960**

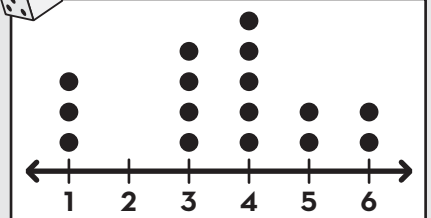
9 hundreds 6 tens 0 ones  
900 + 60 + 0

7

Write 2 things you notice about this dot plot.



Numbers Rolled on a Die



8

There are 51 birds in the forest. 23 more birds come.  
How many birds are in the forest now?

**74 birds 51 + 23 = 74**



**answers will vary**

Name: \_\_\_\_\_

DAY  
**142**

1 Underline the 2 verbs in each sentence. Circle the adverbs that describe the verbs.

He snores loudly, but I just ignore him.  
I only wore that shirt for a minute and I already tore a hole in it.

Adverbs can describe verbs. They tell how, where, and when things happen.

2 Sort the words by their spelling pattern.

roar

more

wore

soar

**-oar**

**roar**

**soar**

**-ore**

**more**

**wore**

3

**adore**

to love something  
very much

(verb)



What does **adore** have  
to do with your favorite toy?

**ANSWERS WILL VARY**  
**[You probably love**  
**it very much.]**

4 Use context clues to find the  
meaning of the underlined word.

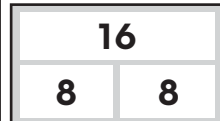
At the emporium, we  
got some new shoes  
and shirts.

Emporium means \_\_\_\_\_.

beach

store

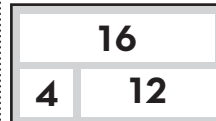
5 Write combinations of 16.



$16 - 8 = 8$

$8 + 8 = 16$

$16 - 8 = 8$



$4 + 12 = 16$

$16 - 12 = 4$

$12 + 4 = 16$

6 Write the number in different  
forms.


510 can be written as:

**5** hundreds **1** ten


or **51** tens

or **510** ones


7 Tell the time.



The hour hand is  
in the **7**  
o'clock space.



**15** minutes  
have passed since  
the hour started.



The time is:  
**7 : 15**

8

The store had 61 whistles. Some of the whistles were sold.  
There are still 38 whistles at the store.

How many whistles were sold?

**23 whistles were sold**

$61 - 23 = 38$



Name: \_\_\_\_\_

DAY  
**143**

1 Add an adverb to complete each sentence. Underline the verb each adverb describes.

**ADVERBS that tell WHEN**

today later tonight  
next year soon next week  
before tomorrow then

We'll visit the seashore \_\_\_\_\_ **ANSWERS WILL VARY**

My chores will be finished \_\_\_\_\_ **VARY**

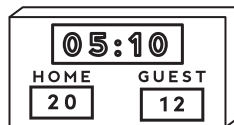
2 Write the word that matches each picture.

score

sore

store

shore



**store**

**score**

3

**adore**

to love something  
very much

(verb)



I like to do lots of things, but I adore...

**ANSWERS WILL VARY**

**[something you like  
doing]**

4

**along**

a l o n g

a l o n g

a l o n g

5 Make an 8 into a 10 to add.

8 + 4 is the same as 10 + 2



8 + 7 is the same as 10 + 5



6 Write the numeral.


7 hundreds  
8 tens  
9 ones

**789**

5 hundreds  
16 ones

**516**

7 Check  the features of the shape to find if it's a rhombus.



- quadrilateral
- parallel sides
- equal sides

Is it a rhombus? circle: **YES** or NO



- quadrilateral
- parallel sides
- equal sides

Is it a rhombus? circle: YES or **NO**

A rhombus is a parallelogram with 4 equal sides.

8 In the first basketball game, my team scored 45 points. In the second game, we scored 28 points.

How many more points did we score in the first game?

**17 more points**  
**45 - 28 = 17**





Name: \_\_\_\_\_

DAY  
**144**

1 Rewrite the sentence correctly.

she easily scord three points

**She easily scored three points.**

2 Circle & write the word that has the same vowel sound as the picture.



sock  
**coat**  
clog

**coat**



**door**  
join  
honk

**door**

3

Who is someone you **adore**?

**adore**

to love something  
very much

(verb)



**ANSWERS WILL VARY**

4

**(-ful)**

"full of"

Is a peacock a **colorful** animal?  
Why or why not?

**Yes, a peacock is a colorful  
animal. It is full of color.**

5 Use the number line to solve  
the problems.



$$70 + 12 = \underline{82}$$



$$24 + 16 = \underline{40}$$

6 Use >, < or = to compare the  
numbers

$$754 < 896$$


$$125 = 125$$

$$660 < 913$$

7 There are 28 oars. Each boat  
needs 2 oars.  
**Do I have enough oars for 15  
boats?**

**No, 15 boats  
need 30 oars.**

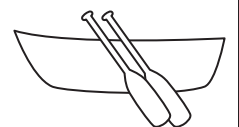
8 Find the total.



$$= \underline{41\text{¢}}$$

Eleanor has 5 dimes.  
Phoebe has 3 quarters and a penny.  
**Who has more money?**

**Phoebe**  
**Eleanor has 50¢. Phoebe has 76¢.**



Name: \_\_\_\_\_

DAY  
**145**

1 Write a sentence telling something you'll do tomorrow. Circle the adverbs. (Hint: tomorrow is an adverb!)

**ANSWERS WILL VARY**

2 Finish the sentence with an adverb from the box. Then  check if the adverb tells **how**, **where**, or **when**.

quickly inside last week nearby already slowly downstairs

**ANSWERS WILL VARY**

We shopped \_\_\_\_\_ at the store.

how  where  when

Adverbs can describe verbs. They tell how, where, and when things happen.

3 Draw a line to connect each word to the correct meaning.

smear

quite

bold

to spread something  
in a messy way

brave and  
confident

very

4 were

w e r e

w e r e

w e r e

5 Solve.

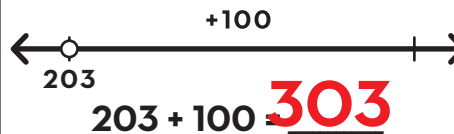
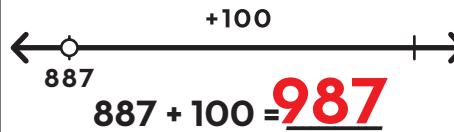
$$9 + 9 = 18$$

$$165 - 65 = 100$$

$$9 + 11 = 20$$

$$300 + 300 = 600$$

6 Draw arrows to add a hundred on the open number line.



7 Coretta read a total of 56 minutes today. She read 16 minutes before school. **How long did she read after school?**

**40 minutes**

**56 - 16 = 40**



The Chapstick is **11** centimeters long.



Name: \_\_\_\_\_

DAY  
**146**

1 What are three things you notice about the sentence below?

I rolled the dice twice and got an eleven and an eight.

**Answers will vary, but may include ideas such as: it starts with a capital, it ends with a period, past tense verb, adverbs, pronouns etc.**



2 Circle the correct spelling for each picture.



prise

**price**

prize

**rice**

rize

rise



**price**

**rice**

3

**thrice**

three times

(adverb)

Take your off your muddy shoes because I've already mopped **thrice!**

How many times have I mopped?

**I've mopped 3 times.**



4

**it's**

i t ' s

i t ' s

i t ' s

5

Florencia and Geo have 13 marshmallows.

If they share the marshmallows equally, how many will each person get?



Each person will get **6 and a half** marshmallows.

6

**141**

**1** hundred **4** tens **1** one  
**100 + 40 + 1**

**705**

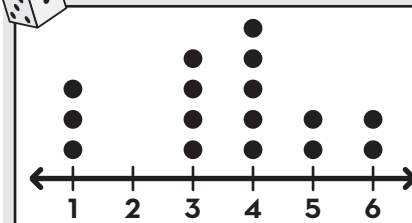
**7** hundreds **0** tens **5** ones  
**700 + 0 + 5**

7

Use the dot plot to answer the questions.



Numbers Rolled on a Die



I rolled a 5 **two** times.

I rolled a **3** four times.

8

I had 4 carrots. I chopped each carrot into 11 slices.

How many carrot slices do I have?

**44 slices**  $11 + 11 + 11 + 11 = 44$

I need 56 slices of carrot to make stew. How many more slices do I need?

**12 more slices**  $44 + 12 = 56$



Name: \_\_\_\_\_

DAY  
147

1 Underline the 2 nouns in each sentence. Circle the **an** that comes before each noun.

I rolled twice and got an eleven and an eight.

Grab an ice cube and an orange slice.

Use **an** before nouns that start with a vowel. Use **a** before nouns that start with a consonant.

2 Sort the words by their spelling pattern.

card

circle

city

cone

hard c - cast

soft c - cent

card  
cone

circle  
city

3

thrice

three times

(adverb)



What does it mean if you've done something **thrice**?

**ANSWERS WILL VARY**

**[It means you've done it three times.]**

4 Finish the sentence with the strongest synonym.

delightful nice good

It's a beautiful day. The weather is so

delightful!

*Synonyms mean almost the same thing, but some have a stronger meaning.*

5 Use 2 numbers in each group to make 16.

9 7 5

$$16 = 9 + 7$$

6 5 11

$$16 = 5 + 11$$

6 Write the number in different forms.


920 can be written as:

9 hundreds 2 tens


or 92 tens

or 920 ones


7 Tell the time.



The hour hand is in the 2 o'clock space.



55 minutes have passed since the hour started.



The time is: 2 : 55

8

The pet store had 72 mice. Some mice were sold, but there are still 45 mice left.

How many mice were sold?

**27 mice were sold**  
**72 - 27 = 45**



Name: \_\_\_\_\_

DAY  
**148**

1 Write a or an before each noun to complete the sentence.

An ice cream is nice on a day like today.

Can an ant lift an apple or just a grain of rice?

2 Write the word that matches each picture.

mice

dice

spice

rice



**dice**

**mice**

3

**thrice**

three times  
(adverb)



Our teacher told us **thrice** to...

**ANSWERS WILL VARY**

4

**going**

g o i n g

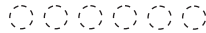
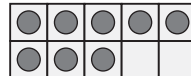
g o i n g

g o i n g

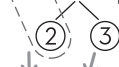
5 Make an 8 into a 10 to add.

8 + 6 is the same as 10 + 4

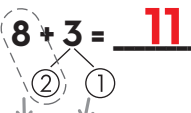
8 + 6 = 14



8 + 5 = 13



10 + 3 = 13



10 + 1 = 11

6

Write the numeral.

2 hundreds  
0 tens  
7 ones

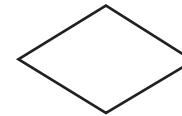
**207**

800 +  
40 +  
9

**849**

7

Check  the features of the shape to find if it's a rhombus.



- quadrilateral
- parallel sides
- equal sides

Is it a rhombus? circle **YES** or NO



- quadrilateral
- parallel sides
- equal sides

Is it a rhombus? circle: YES or **NO**

A rhombus is a parallelogram with 4 equal sides.

8

On Friday, Celia spent 49 minutes on her device.  
On Saturday, she spent 82 minutes on her device.  
How much longer did she spend on Saturday?

**33 more minutes**

**82 - 49 = 33**



Name: \_\_\_\_\_

DAY  
**149**

1 Rewrite the sentence correctly.

add a egg and a onion to the fried rize

**Add an egg and an onion  
to the fried rice.**

2 Circle & write the word that has the same vowel sound as the picture.



print  
stink  
**smile**

**smile**



slice  
wire  
**limp**

**limp**

3

**thrice**

three times  
(adverb)



What's someplace you have visited  
at least **thrice**?

**ANSWERS WILL VARY**

4

**(re-)**

"back" or "again"

If you like the color of your walls,  
should you **repaint** them?  
Why or why not?

**No, you wouldn't change the  
color if you like it. Repaint  
means to paint again.**

5 Use the number line to solve  
the problems.



$$43 - 11 = \underline{32}$$



$$66 - 23 = \underline{43}$$

6 Draw lines to pair up pictures.  
Is it an even or odd amount?



14 is an **even** number.  
even or odd

7 Each glass of lemonade has 3  
ice cubes. There are 24 ice  
cubes in all.

**How many glasses of  
lemonade are there?**

**8 glasses**

$$24 = 3 + 3 + 3 + 3 + 3 + 3 + 3 + 3$$

8 Find the total.



$$= \underline{75\text{¢}}$$

Cedric has 65¢. He gets 2 more dimes.  
**How much money does he have now?**

**He has 85¢.**

$$65\text{¢} + 10\text{¢} + 10\text{¢} = 85\text{¢}$$



Name: \_\_\_\_\_

DAY  
**150**

1 Write a sentence about an ice cream cone. Circle the **an** and **a**.

**ANSWERS WILL VARY**

2 Finish the sentence with an adverb from the box. Then  check if the adverb tells **how**, **where**, or **when**.

outside yesterday accidentally over there carelessly last year

**ANSWERS WILL VARY**

\_\_\_\_\_ I slipped on the ice.

how  where  when

Adverbs can describe verbs. They tell how, where, and when things happen.

3 Draw a line to connect each word to the correct meaning.

quite

grime

adore

to love something  
very much

very

dirt that covers  
something

4

**very**

v e r y

v e r y

v e r y

5 Solve.

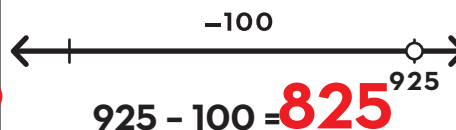
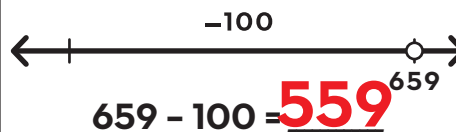
$$18 - 14 = 4$$

$$90 + 100 = 190$$

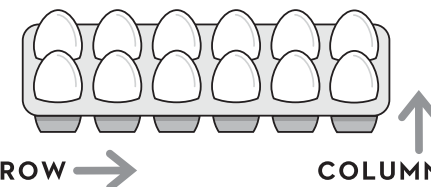
$$20 + 30 = 50$$

$$500 + 40 + 6 = 546$$

6 Draw arrows to subtract 100 on the open number line.



7



There are 2 rows of eggs.

There are 6 columns of eggs.

There are 12 eggs in all.

$$6 + 6 = 12$$

8

The ice cream shop sold 20 scoops of vanilla ice cream. They sold twice as many scoops of chocolate ice cream.

How many scoops of ice cream did they sell in all?

**60 scoops of ice cream**

$$20 + 40 = 60$$



Name: \_\_\_\_\_

DAY  
151

1 What are three things you notice about the sentence below?

You'd be crazy to miss seeing *The Lion King* on stage!

Answers will vary, but may include ideas such as: starts with a capital, ends with an exclamation, pronouns, contractions, adverbs, etc.



2 Circle the correct spelling for each picture.



aj **age** ayg



waje wag **wage**

**age**

**wage**

3

**rage**

a very strong feeling of anger

(noun)

I was full of **rage** when I saw the broken window!

How did I feel?

**I felt strong anger.**



4

**you've**


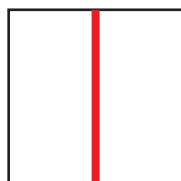
y o u ' v e

y o u ' v e

y o u ' v e

5 Show 2 different ways to partition a square in halves.

2 halves



other answers are possible

6

**844**

**8** hundreds **4** tens **4** ones  
**800 + 40 + 4**

**156**

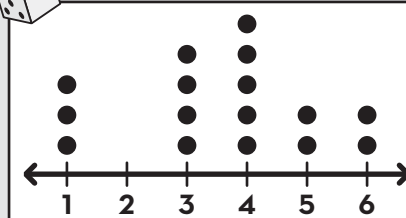
**1** hundred **5** tens **6** ones  
**100 + 50 + 6**

7

Use the dot plot to answer the questions.



Numbers Rolled on a Die



I rolled a **4** the most times.

I rolled a **2** zero times.

8

Gina read from page 30 to page 50 in her book.  
Then she read from page 60 to page 85.  
How many pages did she read in all?

**45 pages**



**30 + 20 = 50    60 + 25 = 85    20 + 25 = 45**

*one hundred fifty-one*



Name: \_\_\_\_\_

**DAY  
152**

1 Circle the proper nouns in each sentence.

You'd be crazy to miss seeing The Lion King on stage in New York City.  
I'm on page 81 in Stuart Little and page 104 in Charlotte's Web.

Capitalize all the words in most multi-word proper nouns.

2 Sort the words by their spelling pattern.

gum      gym      game      gem

**hard g - grant**

**gum**  
**game**

**soft g - giant**

**gym**  
**gem**

3

**rage**  
a very strong feeling of anger  
(noun)  


What does **rage** have to do with dropping something heavy on your foot?

**ANSWERS WILL VARY**  
**[You might feel rage if you drop something heavy on your foot.]**

4 Use context clues to find the meaning of the underlined word.

She said I shouldn't do it and she was right.  
She's such a sage!

- Sage means \_\_\_\_\_.
- very smart person
  - person who tells time

5 Write combinations of 17.


17	17
2   15	11   6
<b>17</b> - 2 = 15	11 + <b>6</b> = 17
17 - <b>15</b> = 2	17 - 6 = <b>11</b>
15 + <b>2</b> = 17	<b>17</b> - 6 = 11

6 Circle true statements.  
Cross out  false statements.


**179 can be expressed as:**

- 179 ones
- 1 hundred 79 tens 9 ones
- 17 tens 9 ones


7 Tell the time.



The time is:  
**9 : 35**



The time is:  
**5 : 55**



The time is:  
**12 : 20**



The zookeeper gave the giraffe 92 piles of leaves.  
The giraffe ate 75 piles of leaves.

How many piles of leaves are left?  
**17 piles are left**  
**75 + 17 = 92**

Name: \_\_\_\_\_

DAY  
**153**

1 Finish each sentence. Remember to capitalize all the words in most proper nouns.

My teacher is named \_\_\_\_\_.

**ANSWERS WILL VARY**

My school is called \_\_\_\_\_.



2 Write the word that matches each picture.

wage

stage

age

page



**stage**

**page**

4 **about**

a b o u t

a b o u t

a b o u t

5 Circle the 2 numbers that make 10. Then find the total.

$2 + 6 + 8 = 16$

$10 + 6$

$5 + 5 + 7 = 17$

6 Write the numeral.

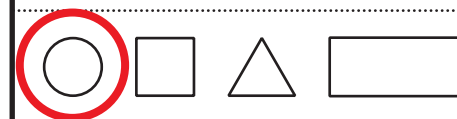
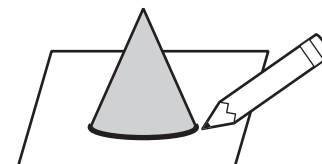
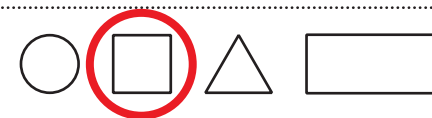
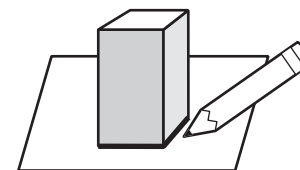
9 hundreds  
4 tens  
3 ones

**943**

75 tens  
8 ones

**758**

7 Circle the shape you can get by tracing each solid shape.



8



The giant ate 76 potatoes and 58 carrots for lunch.

How many vegetables did eat in all?

**134 vegetables**  
 **$76 + 58 = 134$**

Name: \_\_\_\_\_

DAY  
**154**

1 Rewrite the sentence correctly.

he gets a better wage at pat's pizzeria

**He gets a better wage at  
Pat's Pizzeria.**

2 Circle & write the word that has the same vowel sound as the picture.



page  
whale  
**brag**

**brag**



**play**  
fast  
have

**play**

3

**rage**

a very strong  
feeling of anger

(noun)



What might make you feel **rage**?

**ANSWERS WILL VARY**

4

**(-less)**

"without"

If something is **painless**,  
will it hurt?

**No. Painless means  
without pain, so it won't  
hurt.**

5 Subtract.

$$40 - 10 - 5 = \underline{25}$$

$$40 - 15 = \underline{25}$$

$$57 - 20 - 6 = \underline{31}$$

$$57 - 26 = \underline{31}$$

6

Use >, < or = to compare the  
numbers

$$288 > 98$$

$$321 > 213$$

$$917 > 916$$

7


5 mice can be kept in one  
cage.

**How many cages do I need  
for 40 mice?**

**8 cages**

$$40 = 5 + 5 + 5 + 5 + 5 + 5 + 5 + 5$$

8 Find the total.



= **\$4.00**

Gage had 35¢.

He got 2 quarters from his dad.

**How much money does he have now?**

**He has 85¢.**



Name: \_\_\_\_\_

DAY  
**155**

1 Write a sentence telling about a restaurant you like. Circle the proper nouns.

**ANSWERS WILL VARY**

2 Write **a** or **an** before each noun to finish the sentence.

We saw **a** sprout in the garden.

It will bloom into **an** iris flower.

Will I need **an** umbrella if it rains?

Use **an** before nouns that start with a vowel.

3 Draw a line to connect each word to the correct meaning.

**croon**

**thrice**

**adore**

to use a soft, low  
voice

to love something  
very much

three times

4 **won't**

w o n ' t

w o n ' t

w o n ' t

5 Solve.

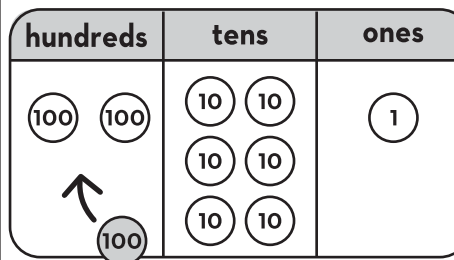
$$63 - 20 = 43$$

$$8 + 6 = 14$$

$$200 + 92 = 292$$

$$600 - 300 = 300$$

6 Write the number shown on the chart.

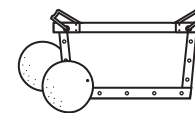


7 10 oranges fit in one box.  
10 boxes of oranges fit on a shelf.  
How many boxes are needed for 129 oranges?

**13 boxes**

How many shelves are needed for the boxes of oranges?

**2 shelves**



8 Measure the ribbons.

RIBBON A is **9**  
centimeters long.

RIBBON B is **11**  
centimeters long.



Name: \_\_\_\_\_

DAY  
156

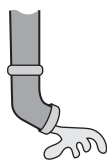
1 What are three things you notice about the sentence below?

If you keep shouting about the bug, I'm not going to catch it!

Answers will vary, but may include ideas such as: it starts with a capital, it ends with an exclamation, pronouns, contractions, -ing verbs, etc.



2 Circle the correct spelling for each picture.



sprote shout **sprout** **spout** spot spowte

**sprout**

**spout**

3

**pout**

to push your lip out to show you're angry or annoyed

(verb)

He **pouted** when his dad said it was time to go.

What is he doing?

**He's pushing his lip out to show he's angry or annoyed.**



4

let's

l e t ' s

l e t ' s

l e t ' s

5

Lincoln is sharing a bowl of popcorn equally with 3 people. MJ is sharing a bowl of popcorn equally with 4 people.

Does Lincoln or MJ get more popcorn?

**Lincoln**



6

Circle numbers that have an 8 in the ones place.

**458**

892

**328**

**968**

181

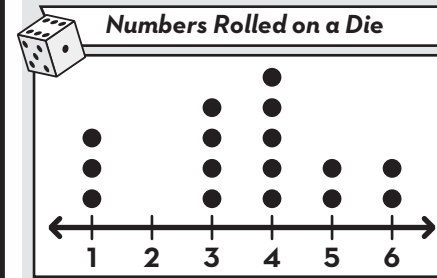
835

486

**708**

7

Use the dot plot to answer the questions.



I rolled **5** and **6** the same number of times.

I rolled a **1** three times.

8

In the park, the scouts planted 13 daisies, 12 marigolds, 12 daisies, and 21 pansies.

How many flowers did they plant in all?

**58 flowers 13 + 12 + 12 + 21 = 58**



Name: \_\_\_\_\_

DAY  
157

1 Circle the 2 verbs in each sentence with **-ing** endings.

If you keep **shouting** about the bug, I'm not **going** to catch it!  
We went **fishing** for trout, but ended up **catching** an old boot.

Adding letters to the ends of words can change their meanings.

2 Sort the words by their spelling pattern.

snout

cloud

brown

clown

**ow - cow**

**brown**  
**clown**

**ou - couch**

**snout**  
**cloud**

3

**pout**

to push your lip out  
to show you're  
angry or annoyed

(verb)



What does **pout** have to do with  
losing a game?

**ANSWERS WILL VARY**

**[You might pout if you  
lose a game.]**

4 Finish the sentence with the  
strongest synonym.

talk shout speak

He was so angry all he  
could do was

**shout**

*Synonyms mean almost the same thing,  
but some have a stronger meaning.*

5 Use 2 numbers in each group  
to make 17.

**8 7 9**

$$17 = 8 + 9$$

**7 6 10**

$$17 = 7 + 10$$

6 Circle true statements.

Cross out  false statements.


**253 can be expressed as:**

~~2 tens 5 ones 3 hundreds~~

**53 ones 2 hundreds**


**25 tens 3 ones**

7 Tell the time.




The time is:

**2 : 25**



The time is:

**6 : 00**



The time is:

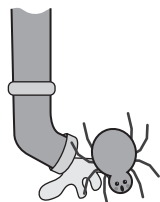
**10 : 40**

8 There were a lot of spiders in the waterspout. The rain came down and washed 15 spiders out.

There are still 108 spiders left in the waterpout.

How many spiders were there to begin with?

**123 spiders were in the spout**  
**123 - 15 = 108**



Name: \_\_\_\_\_

DAY  
**158**

1 Complete each sentence by adding **-ing** to a word from the WORD BANK.

**WORD BANK**

wait      play  
sing      go  
try      read

I'm \_\_\_\_\_ without her.  
**ANSWERS WILL VARY**  
They're still \_\_\_\_\_.

2 Write the word that matches each picture.

shout

spout

scout

sprout



**shout**

**scout**

4 **should**

s h o u l d

s h o u l d

s h o u l d

5 Circle the 2 numbers that make 10. Then find the total.

$1 + 5 + 9 = 15$

$4 + 7 + 3 = 14$

6 Write the numeral.

6 tens  
1 one  
9 hundreds      **961**

7 +  
400 +  
20      **427**

3 She **pouted** when she heard...

**ANSWERS WILL VARY**

**pout**

to push your lip out  
to show you're  
angry or annoyed

(verb)

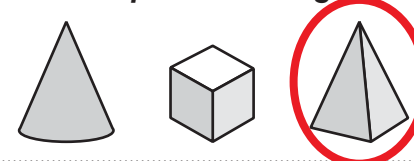


7 Circle the solid shape with the correct face.

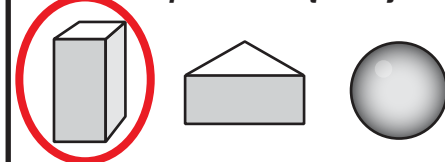
Which shape has a circle face?



Which shape has a triangle face?



Which shape has a square face?



8 There were 124 cloudy days in Sprout City last year.  
Sunville only had 86 cloudy days.  
How many fewer cloudy days did Sunville have than Sprout City?

**38 fewer cloudy days**

$124 - 86 = 38$



Name: \_\_\_\_\_

DAY  
**159**

1 Rewrite the sentence correctly.

pout ing isnt helpful right now

**Pouting isn't helpful right now.**

2 Circle & write the word that has the same vowel sound as the picture.

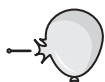


hole

**grout**

float

**grout**



**clog**

wore

love

**clog**

3

What might make you **pout**?

**pout**

to push your lip out  
to show you're  
angry or annoyed

(verb)



**ANSWERS WILL VARY**

4

**(pre-)**

"before"

If your dinner is **precooked**,  
do you need to cook it?

**No, precooked means it's  
already cooked.**

5 Add.

$$20 + 10 + 8 = \underline{38}$$

$$20 + 18 = \underline{38}$$

$$32 + 50 + 4 = \underline{86}$$

$$32 + 54 = \underline{86}$$

6

Draw lines to pair up pictures.  
Is it an even or odd amount?



15 is an odd number.  
even or odd

7

Each rainbow trout has 7 fins.  
There are 3 trout.  
**How many fins are there?**

**21 fins**

$$7 + 7 + 7 = 21$$

8 Find the total.



= **\$2.25**

Sakari had 5 dimes and a nickel  
She spent 20¢ on a pencil.  
**How much money does she have now?**

**She has 35¢.**





Name: \_\_\_\_\_

DAY  
**160**

1 Write a sentence about shouting. Circle the verbs with **-ing** at the end.

**ANSWERS WILL VARY**

2 Write a proper noun to answer each question. Remember capitals!

A book title: \_\_\_\_\_

A country: **ANSWERS WILL VARY** \_\_\_\_\_

Your street: \_\_\_\_\_

Capitalize all the words in most multi-word proper nouns.

3 Draw a line to connect each word to the correct meaning.

<b>rage</b>	<b>coil</b>	<b>thrice</b>
to wind around in circles	three times	a very strong feeling of anger

*(Red lines connect 'rage' to 'a very strong feeling of anger', 'coil' to 'to wind around in circles', and 'thrice' to 'three times'.)*

4 **great**

g r e a t

g r e a t

g r e a t

5 Solve.

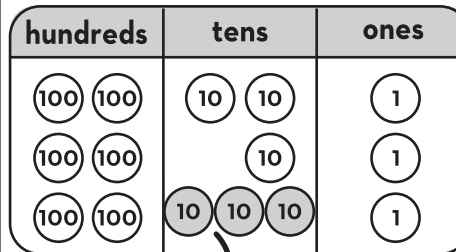
20 - 11 = 9

5 + 8 = 13

70 + 20 = 90

30 + 600 + 10 = 640

6 Write the number shown on the chart.



30 less than 663 is **633**.

7

101	102	103	104	105
201	202	203	204	205
301	302	303	304	305

ROW → COLUMN ↑

There are **3** rows of mailboxes

There are **5** columns of mailboxes.

There are **15** mailboxes in all.

5 + 5 + 5 = 15

8 Each table has a box of crayons. In the box are 2 yellows, 2 blues, 1 green, 3 reds, and 2 blacks. There are 10 tables.

How many red crayons are there in all?

**10 groups of 3 = 30 red crayons**

How many crayons are there altogether?

**2 + 2 + 1 + 3 + 2 = 10 10 groups of 10 = 100**



Name: \_\_\_\_\_

DAY  
**161**

1 What are three things you notice about the sentence below?

We saw the lizards hiding and crawling on the lawn.

Answers will vary, but may include ideas such as: starts with a capital, ends with an period, pronouns, contractions, verbs ending in -ing, etc.



2 Circle the correct spelling for each picture.



jaw

jah

jawe



pow

paw

pah

**jaw**

**paw**

4 every


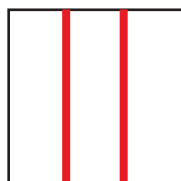
e v e r y

e v e r y

e v e r y

5 Show 2 different ways to partition a square in thirds.

3 thirds



3 thirds are equal to a whole.

6 289

2 hundreds 8 tens 9 ones  
200 + 80 + 9

74

0 hundreds 7 tens 4 ones  
0 + 70 + 4

7 Write 2 things you notice about this data table.

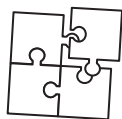
Number of Students  
Who Ride Each Bus



BUS 1	25
BUS 2	22
BUS 3	19
BUS 4	31

8

I did a jigsaw puzzle with 125 pieces and a jigsaw puzzle with 110 pieces.  
How many puzzle pieces were there in all?



**235 pages**  
**125 + 110 = 235**

**ANSWERS  
WILL VARY**

Name: \_\_\_\_\_

DAY  
**162**

1 Circle the 2 verbs in each sentence with **-ing** endings.

We saw the lizards hiding and crawling on the lawn.  
You better be joking about breaking the law!

For words that end in e, drop the e before adding -ing.

2 Sort the words by their spelling pattern.

launch      dawn      hawk      pause

**-au**

**launch**  
**pause**

**-aw**

**dawn**  
**hawk**

3

**raw**  
not cooked  
(adjective)



What does **raw** have to do with meat?

**ANSWERS WILL VARY**  
**[You need to cook raw meat before you eat it.]**

4 Use context clues to find the meaning of the underlined word.

The dog gnawed on the bone.

Gnawed means \_\_\_\_\_.

- barked
- chewed

5 Write combinations of 18.

18	18
9   9	3   15

18 - **9** = 9      **3** + 15 = 18  
9 + **9** = 18      18 - **15** = 3  
**18** - 9 = 9      15 + 3 = **18**

6 Circle true statements. Cross out  false statements.


965 can be expressed as:

~~965 hundreds~~


**9 hundreds 6 tens 5 ones**

**96 tens 5 ones**


7 Tell the time.



The time is:  
**1 : 25**



The time is:  
**7 : 05**



The time is:  
**3 : 50**

8



There were 199 paper straws. Some straws were used  
64 straws were left.

How many straws were used?

**135 straws were used**  
**199 - 135 = 64**

Name: \_\_\_\_\_

DAY  
**163**

1 Add **-ing** to the underlined verbs to complete each sentence. Don't forget to drop the e!

I like to hike and I get to go **hiking** today!

I'll wave goodbye to you, but I'd rather be **waving** hello.

2 Write the word that matches each picture.

draw

straw

slaw

claw



**claw**



**draw**

3

The chef served raw...

**raw**

not cooked

(adjective)



**ANSWERS WILL VARY**

**[an uncooked food]**

4

**saw**

**s a w**

**s a w**

**s a w**

5 Make the problems easier by making 10 or using doubles.

$$4 + 3 + 3 = \underline{10}$$

$$6 + 4 + 6 = \underline{16}$$

6 Write the numeral.

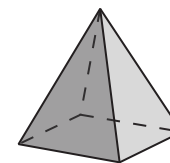
**6** hundreds  
**5** tens  
**5** ones

**655**

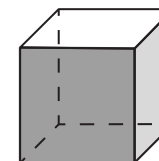
97 tens  
1 one

**971**

7 Tell how many faces each solid shape has.



A pyramid has **5** faces.



A cube has **6** faces.

A **face** is a flat part of a solid (3-D) shape.

8

On my camping trip, I saw 175 birds and 23 fish.

How many animals did I see in all?

**198 animals**  
**175 + 23 = 198**



Name: \_\_\_\_\_


DAY  
**164**

1 Rewrite the sentence correctly.

Jens baby is smileing and crawling


**Jen's baby is smiling  
and crawling.**

2 Circle & write the word that has the same vowel sound as the picture.



tray  
next  
yawn

**tray**



say  
sad  
law

**law**

3

~~~~~  
**raw**  
~~~~~  
not cooked  
(adjective)



What foods do you like to eat **raw**?

**ANSWERS WILL VARY**

4

**(-ly)**

"in a certain way"

If you're moving **quickly**,  
are you going fast?

**Yes. Quick means to move  
in a quick way.**

5

Subtract.

$$64 - 30 - 1 = \underline{33}$$

$$64 - 31 = \underline{33}$$

$$77 - 40 - 8 = \underline{29}$$

$$77 - 48 = \underline{29}$$

6

Use >, < or = to compare the numbers

$$863 = 863$$

$$994 > 949$$

$$396 < 693$$

7

Each crab has 2 claws. There were 22 claws in all.

**How many crabs were there?**

**11 crabs**  
 $22 = 2 + 2 + 2 + 2 + 2 + 2 + 2 + 2 + 2 + 2 + 2$



8 Find the total.



= **\$6.21**

I have 38¢.  
Marie has 82¢.

**How much more money does Marie have?**

**She has 44¢ more.**

Name: \_\_\_\_\_

DAY  
**165**

1 Write a sentence about making your bed. Circle the verbs with **-ing**.

**ANSWERS WILL VARY**

2 Add **-ing** to the underlined verbs.

I yawn. I am **yawning**.

We draw. We are **drawing**.

Birds squawk. They're **squawking**.

Adding letters to the ends of words can change their meanings.

3 Draw a line to connect each word to the correct meaning.

**glare**

**rage**

**pout**

a very strong feeling  
of anger

to push your lip out in  
anger or annoyance

to look at someone in  
an angry way

4 **heard**

h e a r d

h e a r d

h e a r d

5 Solve.

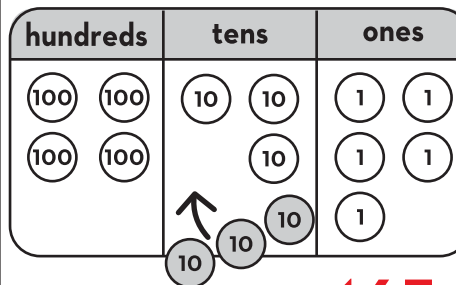
$$21 - 10 = 11$$

$$34 + 500 = 534$$

$$14 + 5 = 19$$

$$30 - 21 = 9$$

6 Write the number shown on the chart.



7 I made a lot of drawings. I gave my grandma 20 drawings and gave my teacher 15 drawings. I still have 45 drawings left. **How many drawings did I make in all?**

**80 drawings**

$$20 + 15 + 45 = 80$$

8 Measure the ribbons.

RIBBON A is **12** cm long.

RIBBON B is **4** cm shorter than RIBBON A.



Name: \_\_\_\_\_

DAY  
**166**

1 What are three things you notice about the sentence below?

You can't go swimming in a bathtub or skipping in a shower!

Answers will vary, but may include ideas such as: it starts with a capital, it ends with an exclamation, pronouns, contractions, -ing verbs, compound word, etc.



2 Circle the correct spelling for each picture.



brow **bow** bowe **vow** voaw vowe



**bow**

**vow**

3

**chow**


to eat a lot of food quickly

(verb)

We all **chowed** down on the pizza.

What did we do?

**We ate a lot of pizza quickly.**



4

**among**

**a m o n g**

**a m o n g**

**a m o n g**

5 Catalina has 2 cans of paint. She uses half a can to paint her playhouse.

How many cans of paint does Catalina have left?

**1 and a half**



6 Circle numbers that have a 6 in the ones place.

161 **586** 362

60 **946**

**26** 679 **786**

7 Use the data table to answer the questions.

Number of Students Who Ride Each Bus



BUS 1	25
BUS 2	22
BUS 3	19
BUS 4	31

BUS **4** has the most students.

22 students ride BUS **2**.

8

The farmer needs to milk all her cows. So far, she has milked 118 cows.

In all, the farmer has 238 cows.

How many more cows still need to be milked?

**120 cows**  $118 + 120 = 238$



Name: \_\_\_\_\_

DAY  
**167**

1 Circle the 2 verbs in each sentence with **-ing** endings.

You can't go **swimming** in a bathtub or **skipping** in a shower!  
I'm **stirring** the powder with water, but it's not **mixing**.

Adding letters to the ends of words can change their meanings.

2 Sort the words by their spelling pattern.

frown found mouth growl

**ow - cow**


**frown**  
**growl**

**ou - couch**

**found**  
**mouth**

3

**chow**  
to eat a lot of food quickly  
(verb)



What does **chow down** have to do with lunch?

**ANSWERS WILL VARY**

**[You might chow down at lunch time.]**

4 Finish the sentence with the strongest synonym.

said promised **vowed**

He **vowed** to always be my friend.

*Synonyms mean almost the same thing, but some have a stronger meaning.*

5 Use 2 numbers in each group to make 18.

11 7 9  
 $18 = 11 + 7$

9 8 10  
 $18 = 8 + 10$

6 Circle true statements. Cross out  false statements.


803 can be expressed as:

**80 tens 3 ones**


**803 ones**

~~80 ones 5 tens~~


7 Tell the time.



The time is:  
**11 : 35**



The time is:  
**8 : 10**




The time is:  
**1 : 45**

8

The queen got some new gowns. She used to have 231 gowns, but now she has 253 gowns.

How many new gowns did the queen get?

**22 new gowns**  
**22 + 231 = 253**





Name: \_\_\_\_\_

DAY  
**168**

1 Add **-ing** to the underlined verbs to complete each sentence. Don't forget to double the consonant!

We clap for all the singers, but we were **clapping** a lot for him.  
Her crown will slip if it's too big and we don't want it **slipping**!

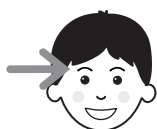
2 Write the word that matches each picture.

town

brow

cow

plow



**plow**

**brow**

4 **think**

t h i n k

t h i n k

t h i n k

5 Make the problems easier by making 10 or using doubles.

$$7 + 2 + 3 + 5 = \underline{17}$$

$$2 + 2 + 8 + 8 = \underline{20}$$

6 Write the numeral.

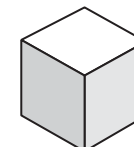
2 tens  
0 hundreds  
8 ones

**28**

600 +  
4 +  
70

**674**

7



Bert saw this picture and said cubes have 3 faces.  
Is Bert right or wrong?  
Explain how you know.

**Bert is wrong. A cube has 6 faces. In a drawing, you can only see 3 faces.**

8 265 people live in my town. 51 people live in apartments.  
The rest of the people live in houses.

How many people live in houses?

**214 people live in houses**

$$264 - 51 = \underline{214}$$



Name: \_\_\_\_\_

DAY  
**169**

1 Rewrite the sentence correctly. is he grabing an towel

**Is he grabbing a towel?**


2 Circle & write the word that has the same vowel sound as the picture.

	cow love goat	<b>crown</b>
---	---------------------	--------------

	plow wore from	<b>wore</b>
---	----------------------	-------------

3

**chow**  
to eat a lot of food quickly  
(verb)



What do you like to **chow** down on if you're very hungry?

**ANSWERS WILL VARY**

4 **(mid-)**

"near the middle of"

If we are **midway** to the zoo, are we at the zoo yet?

**No, midway means we're only in the middle of the way there.**

5 Add.

$26 + 10 + 7 = \underline{43}$


$26 + 17 = \underline{43}$

$59 + 40 + 2 = \underline{101}$

$59 + 42 = \underline{101}$

6

Draw lines to pair up pictures. Is it an even or odd amount?



18 is an **even** number.  
even or odd


7

Each hotel room needs 2 towels. I have 44 towels.


**Do I have enough towels for 25 hotel rooms?**

**No, 25 hotel rooms need 50 towels.**

**$25 + 25 = 50$**



8 Find the total.



**= \$5.76**

Magnus wants a notebook that costs \$1.20. He has 5 quarters.

**Does he have enough to buy the notebook?**

**Yes, 5 quarters = \$1.25**

Name: \_\_\_\_\_

DAY  
**170**

1 Write a sentence about shopping. Circle the verbs with **-ing** at the end.

**ANSWERS WILL VARY**

2 Add **-ing** to the underlined verbs. Don't forget to drop the e!

I ride. I am **riding**.

We bake. We are **baking**.

They vote. They're **voting**.

For words that end in e, drop the e before adding -ing.

3 Draw a line to connect each word to the correct meaning.

**raw**

**pout**

**smear**

to push your lip out in anger or annoyance

not cooked

to spread something in a messy way

4 **these**

t h e s e

t h e s e

t h e s e

5 Solve.

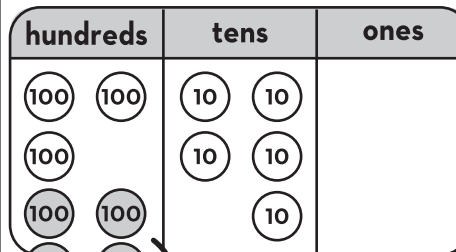
$$30 - 4 = 26$$

$$800 + 72 = 872$$

$$72 - 12 = 60$$

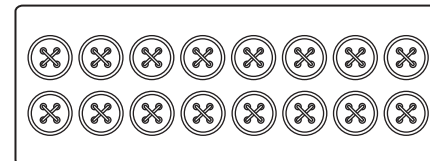
$$8 + 8 + 2 = 18$$

6 Write the number shown on the chart.



400 less than 760 is **360**.

7 ROW →



There are **2** rows of buttons

There are **8** buttons in each row.

There are **16** buttons in all.

$$8 + 8 = 16$$

8

At the flower shop, 10 flowers fit in a vase. 10 vases fit on a shelf.


There are 319 flowers.

How many vases are needed for the flowers?

**319 = 31 groups of 10 + 9 extra = 32 vases**

How many shelves are needed for the vases?

**32 vases = 3 groups of 10 + 2 extra = 4 shelves**



Name: \_\_\_\_\_

DAY  
**171**

1 What are three things you notice about the sentence below?

Does Mr. Waters sell baseballs at the mall on Wall St.?

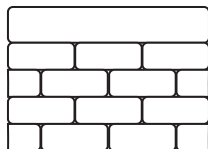
Answers will vary, but may include ideas such as: starts with a capital, ends with a question, proper nouns, compound words, abbreviations, verb, etc.



2 Circle the correct spelling for each picture.



toll tall tawl



wahl woll wall

**jaw**

**paw**

4 **caught**



c a u g h t

c a u g h t

c a u g h t

5 Show 2 different ways to partition a square in fourths.

4 fourths



other answers are possible

6 **728**

7 hundreds 2 tens 8 ones  
**700 + 20 + 8**

**39**

0 hundreds 3 tens 9 ones  
**0 + 30 + 9**

The **squall** ruined our picnic.

What ruined the picnic?

**Our picnic was ruined by a sudden, windy rainstorm.**



7

Write 2 things you notice about this data table.

Number of Students Who Ride Each Bus



BUS 1	25
BUS 2	22
BUS 3	19
BUS 4	31

The fewest students ride

**BUS 3**.

**9** more students ride

**BUS 4 than BUS 2.**

8

219 kids signed up to play basketball.

55 more kids came to sign up.

How many kids signed up for basketball?

**274 kids signed up for basketball**

**219 + 55 = 274**



Name: \_\_\_\_\_

DAY  
**172**

1 Circle the 2 abbreviations in each sentence.

Does **Mr.** Waters sell baseballs at the mall on Wall **St.**?  
On **Tues.** night, **Sen.** Jones will speak at a townhall meeting.

Capitalize abbreviations of names and titles.

2 Sort the words by their spelling pattern.

want wash salt call


**-al**

**salt**  
**call**

**-wa**

**want**  
**wash**

3

**squall**  
a sudden, windy storm that brings rain or snow  
(noun)  


What does **squall** have to do with an umbrella?

**ANSWERS WILL VARY**  
**[You might want an umbrella if there's a squall.]**

4 Use context clues to find the meaning of the underlined word.

I was appalled by the rude things they said!

Appalled means \_\_\_\_\_.

- shocked and disgusted
- hungry and grumpy


5 Write combinations of 19.

19	19
4 15	2 17
<b>19</b> - 4 = 15	17 + <b>2</b> = 19
19 - <b>15</b> = 4	19 - 2 = <b>17</b>
15 + <b>4</b> = 19	<b>19</b> - 17 = 2


6 Circle true statements. Cross out  false statements.

**749 can be expressed as:**  
**74 tens 9 ones**  
~~7 ones 4 hundreds 9 tens~~  
**9 ones 7 hundreds 4 tens**


7 Tell the time.



The time is:  
**7 : 15**



The time is:  
**2 : 30**



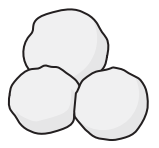
The time is:  
**6 : 55**

8

The kids rolled 356 snowballs. They threw some of the snowballs. They have 32 snowballs left.

How many snowballs did they throw?

**324 snowballs were thrown**  
**356 - 324 = 32**



Name: \_\_\_\_\_

DAY  
**173**

1 Finish the sentences with names of people you know. Use the titles: Mr., Ms., Mrs., or Miss.

My neighbor is \_\_\_\_\_.

**ANSWERS WILL VARY**

My teacher is \_\_\_\_\_.


2 Write the word that matches each picture.

ball

call

small

fall



**small**

**call**

3

**squall**

a sudden, windy storm that brings rain or snow

(noun)



Because of the **squall**, we...

**ANSWERS WILL VARY**

4

**people**

**p e o p l e**

**p e o p l e**

**p e o p l e**

5 Make the problems easier by making 10 or using doubles.

$$7 + 5 + 5 + 3 = \underline{20}$$

$$6 + 1 + 3 + 4 = \underline{14}$$

6 Write the numeral.

**9** hundreds  
**0** tens  
**9** ones

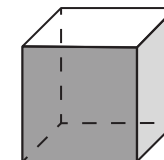
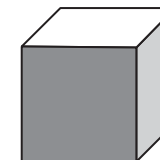
**909**

286 ones

**286**

7 Tell everything you know about the shape.

**cube**



**ANSWERS WILL VARY**

**[It has 6 square faces, it looks like a box, it has 12 edges, it has 8 vertices, you can stack it, etc.]**

8

The highest waterfall is Angel Falls in Venezuela. It is 979 meters high.

In New Zealand, Browne Falls is 836 meters high.

How much higher is Angel Falls than Browne Falls?

**143 meters**

$$836 + \underline{143} = 979$$



Name: \_\_\_\_\_

DAY  
**174**

1 Rewrite the sentence correctly.

did dr smith say i might grow taller

**Did Dr. Smith say I  
might grow taller?**

2 Circle & write the word that has the same vowel sound as the picture.

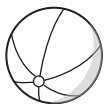


fall

said

gray

**gray**



hawk

ramp

bake

**hawk**

3

**squall**

a sudden, windy  
storm that brings  
rain or snow

(noun)



What would you do if you were  
caught in a **squall**?

**ANSWERS WILL VARY**

4

**(-er)**

“a person who does something”

What does a **painter** do?

**A painter is someone  
who paints.**

5 Subtract.

$$93 - 30 - 7 = \underline{56}$$

$$93 - 37 = \underline{56}$$

$$62 - 40 - 4 = \underline{18}$$

$$62 - 44 = \underline{18}$$

6

Use  $>$ ,  $<$  or  $=$  to compare the  
numbers

$$892 > 829$$

$$433 = 433$$

$$516 < 561$$

7

In football, a touchdown is  
worth 6 points. My team made  
4 touchdowns.


**How many points did we  
get?**

**24 points**

$$6 + 6 + 6 + 6 =$$

**24**

8 Find the total.



**= \$7.40**

Malin had 2 quarters and 2 dimes.

She spent 28¢ on a sticker.

**How much more money does Malin have left?**

**She has 42¢ left.**



Name: \_\_\_\_\_

DAY  
**175**

1 Write a sentence about what you do on Saturday. Abbreviate Saturday as **Sat.** (Circle) the abbreviation.

**ANSWERS WILL VARY**

2 Add **-ing** to the verbs. Don't forget to double the consonant!

I grin. I am **grinning**.

We stop. We are **stopping**.

Bees hum. They're **humming**.

Adding letters to the ends of words can change their meanings.

3 Draw a line to connect each word to the correct meaning.

**raw**

**chow**

**quite**

very

not cooked

to eat a lot of food quickly

4 **earth**

e a r t h

e a r t h

e a r t h

5 Solve.

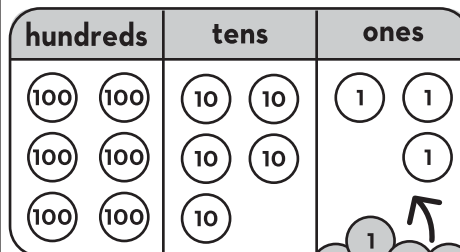
$$5 + 4 = 9$$

$$70 + 30 = 100$$

$$50 - 6 = 44$$

$$8 + 16 = 24$$

6 Write the number shown on the chart.



4 more than 653 is **657**.

7 A signed copy of the book *Charlotte's Web* is worth \$795. A signed copy of *Harry Potter* is worth \$175.

**How much more is *Charlotte's Web* worth?**

**\$620 more**

**\$795 - \$175 = \$620**

8 Measure the ribbons.

RIBBON A is **5** cm long.

RIBBON B is **11** cm longer than RIBBON A.





Name: \_\_\_\_\_

DAY  
**176**


1 What are three things you notice about the sentence below?

“At the Clark Aquarium, we saw hundreds of sharks,” I said.

Answers will vary, but may include ideas such as: it starts with a capital, it ends with a period, pronouns, proper nouns, plural nouns, quotation marks, etc.



2 Circle the correct spelling for each picture.



spark    sparek    **spark**    darke    **dark**    dawrk

**spark**



**dark**

3

**lark**

something you do for the fun of it

(noun)

He doesn't care about being the best, he just plays soccer for a **lark**.

Why does he play soccer?

**He plays soccer for the fun of it.**



4

**would**

w o u l d


w o u l d

w o u l d

5

Fabian has 4 bottles of water. He drinks half of the bottles. How many bottles of water does he have left?

**2 bottles left**



6

Circle numbers that have a 4 in the tens place.

234    **747**    493

**546**    **840**

**941**    **542**    674

7

Use the data table to answer the questions.

Number of Students Who Ride Each Bus



BUS 1	25
BUS 2	22
BUS 3	19
BUS 4	31

31 students ride BUS **4**.

In all, **47** students ride BUSES 1 and 2.

8

In the morning, some kids were playing in the park. Later, 153 more kids came to the park. Then there were 263 kids in the park.

How many kids were at the park in the morning?

**110 kids**  $110 + 153 = 263$



Name: \_\_\_\_\_

DAY  
**177**

1 Underline the words that are spoken in each sentence.

“At the Clark Aquarium, we saw hundreds of sharks,” I said.  
Mark explained, “We often park our car here when we visit.”

Put quotation marks around what is being said in a sentence.

2 Sort the words by their spelling pattern.

storm spark north card


**-ar**

**spark  
card**

**-or**

**storm  
north**

3

**lark**  
something you do  
for the fun of it  
(noun)  


What does a **lark** have to do with climbing a tree?

**ANSWERS WILL VARY**  
**[You might climb a tree for the fun of it.]**

4 Finish the sentence with the strongest synonym.

stark empty plain

There was very little in the room. It was **stark**.

*Synonyms mean almost the same thing, but some have a stronger meaning.*


5 Use 2 numbers in each group to make 19.

**11 12 7**  
 $19 = 12 + 7$   
**9 8 10**  
 $19 = 9 + 10$


6 Circle true statements. Cross out  false statements.

**253 can be expressed as:**  
 20 tens 53 ones  
 2 ones 5 tens 2 hundreds  
 253 ones


7 Tell the time.



The time is:  
**8 : 20**




The time is:  
**3 : 00**



The time is:  
**11 : 45**

8 There were 360 markers in the art room. Some markers dried out. Now there are 275 markers in the art room.



How many markers dried out?  
**85 markers dried out**  
 **$360 - 85 = 275$**

Name: \_\_\_\_\_

DAY  
**178**

1 Add quotation marks “ ” before and after the words that are spoken in each sentence.

Temo shouted, “Castle Park doesn’t even have a castle!”  
“It’s too dark to see any of the street signs,” I said.

2 Write the word that matches each picture.

mark

lark

bark

park



**bark**

**mark**

3

**lark**

something you do  
for the fun of it

(noun)



She thought it would be a **lark** if we...

**ANSWERS WILL VARY**

**[Did something for fun.]**

4

**want**

w a n t

w a n t

w a n t

5 Make the problems easier by  
making 10 or using doubles.

$$3 + 4 + 6 + 7 = \underline{20}$$

$$1 + 9 + 1 + 9 = \underline{20}$$

6 Write the numeral.

9 tens  
4 ones  
5 hundreds

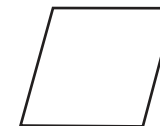
**594**

800 +  
7 +  
30

**837**

7 Tell everything you know  
about the shape.

rhombus



8


The whale shark is the largest shark and can grow to be 540 inches long.

The dwarf lantern shark only grows to 8 inches long.

How much shorter is the dwarf lantern shark than the whale shark?

**532 inches shorter**

$$540 - 8 = \underline{532}$$



**ANSWERS WILL VARY**

**[It's a flat shape, it has  
4 equal sides, it has  
opposite parallel side,  
it's a quadrilateral, etc.]**

Name: \_\_\_\_\_

DAY  
**179**

1 Rewrite the sentence correctly.

Be home before dark, said Mom

**“Be home before dark,” said Mom.**

2 Circle & write the word that has the same vowel sound as the picture.



slick  
**start**  
bear

**start**



**turn**  
floor  
yarn

**turn**

3

**lark**

something you do  
for the fun of it

(noun)



What would you do for a **lark**?

**ANSWERS WILL VARY**

**[Something you'd do  
for fun.]**

4

**(dis-)**

“not” or “opposite of”

Should you trust a **distrustful**  
person?

**No, distrustful means not  
trustful so you shouldn't  
trust that person.**

5

Add.

$$38 + 20 + 8 = \underline{66}$$

$$38 + 28 = \underline{66}$$

$$75 + 1 + 9 = \underline{94}$$

$$75 + 19 = \underline{94}$$

6

Draw lines to pair up pictures.  
Is it an even or odd amount?



23 is an **odd** number.  
even or odd

7

I made some bookmarks. Each  
bookmark has 3 heart stickers.  
I used 21 heart stickers in all.  
**Do many bookmarks did I  
make?**

**7 bookmarks**

$$3 + 3 + 3 + 3 + 3 + 3 + 3 = 21$$

8

Find the total.



= **\$1.62**

Adrià had 75¢.

He gets 2 dollars and a quarter from his dad.

**How much does he have now?**

**\$3.00**



Name: \_\_\_\_\_

DAY  
**180**

1 Write something a dentist might say. Circle the quotation marks.

**ANSWERS WILL VARY**

2 Write the correct abbreviation from the box next to each word.

Mr.      Capt.      Aug.      St.

Street St.      Captain Capt.

Mister Mr.      August Aug.

Capitalize abbreviations of names and titles.

3 Draw a line to connect each word to the correct meaning.

<u>adore</u>	<u>squall</u>	<u>chow</u>
to love something very much	to eat a lot of food quickly	a sudden, windy storm that brings rain or snow

4 he'd

h	e	'	d
h	e	'	d
h	e	'	d

5 Solve.

$50 - 5 = 45$

$40 + 60 = 100$

$22 - 10 = 12$


$10 + 300 + 60 = 370$

6 Write the number shown on the chart.

hundreds	tens	ones
(100) (100)	(10) (10)	(1) (1)
	(10) (10)	(1) (1)
	(10) (10)	(1) (1)
	(10) (10)	

80 less than 286 is 206.

7 ROW →



There are 3 rows of chocolate squares.

There are 6 chocolate squares in each row.

There are 18 chocolate squares in all.

$6 + 6 + 6 = 18$

8

A brown parka costs \$119.  
A blue parka costs \$26 more than a brown one.  
How much does a blue parka cost?

**\$145**

**\$119 + \$26 = \$145**





## >> Terms of Use <<

The original purchaser of this document is hereby granted permission to reproduce this document specifically for teaching purposes in a single classroom. If you are NOT the original purchaser, please download the item from my store on Teachers Pay Teachers before making any copies. Redistributing, editing, selling, or posting this item or any part thereof on the Internet is strictly prohibited without first gaining permission from the author. Violations are subject to the penalties of the Digital Millennium Copyright Act.

Please contact us if you wish to be granted special permission or if you have a question about the usage of this product.

## >> Which Means? <<

You **CANNOT** copy this resource for others...  
but you **CAN** tell them all about it!

You **CANNOT** put a copy of this resource online...  
but you **CAN** link to the item in our store!

You **CANNOT** change or sell this resource...because, well, c'mon! It took a long time and a lot of effort for us to make it!

# THANK YOU FOR YOUR DOWNLOAD!



**SHOP**

Hello there! We are a set of sisters who are the brains behind the 'Second Story Window' brand. We are both former 2nd grade teachers and current preschool teachers with a combined 17 years experience in the classroom. We love to make life just a little easier for teachers by designing curriculum that is both rigorous and easy-to-use!

*Emily & Heidi*

TRANSFORM YOUR

## Word Work INTO Word Play

- A COMPREHENSIVE PHONICS CURRICULUM -

*Ready to take your word work  
to the next level?*

CLICK THE BUTTON BELOW TO TRY OUT OUR  
PHONICS CURRICULUM... COMPLETELY FREE!

**I WANT WORD PLAY!**

